

QUESTION PAPER
Store Keeper [SHIFT - 1]

Exam Date : 06/09/2023

Time : 03:30 PM - 05:30 PM

SECTION 1

Question 1

Question Id : 1

The value of $\frac{(3.5 \times 1.4)}{0.7}$ is:

Answer :

- (A) 0.7
(B) 2.4
(C) 3.5
(D) None of these

Option Id

- ☐ 1001
☐ 1002
☐ 1003
☐ 1004

Right Answer :
None of these

Right Option Id : 1004

Question 2

Question Id : 21

Find the roots of the quadratic equation: $2x^2 + 3x - 9 = 0$?

Answer :

- (A) 3, -3/2
(B) 3/2, -3
(C) -3/2, -3
(D) 3/2, 3

Option Id

- ☐ 21001
☐ 21002
☐ 21003
☐ 21004

Right Answer :
3/2, -3

Right Option Id : 21002

Question 3

Question Id : 18

Six bells commence tolling together and toll at intervals of 2, 4, 6, 8, 10 and 12 seconds respectively. In 30 minutes, how many times do they toll together?

Answer :

- (A) 4
(B) 10
(C) 15
(D) 16

Option Id

- ☐ 18001
☐ 18002
☐ 18003
☐ 18004

Right Answer :
16

Right Option Id : 18004

Question 4

Question Id : 19

If the side of rhombus is 20 cm and one of its diagonals is 24 cm, then its area is:

Answer :

- (A) 384 cm²
(B) 348 cm²
(C) 386 cm²
(D) None of these

Option Id

- ☐ 19001
☐ 19002
☐ 19003
☐ 19004

Right Answer :
384 cm²

Right Option Id : 19001

Question 5

A vendor bought 6 toffees for a rupee. How many for a rupee must he sell to gain 20%?

Answer :

(A) 6

(B) 5

(C) 4

(D) 10

Question Id : 20

Option Id

☐ 20001

☐ 20002

☐ 20003

☐ 20004

Right Answer :
5

Right Option Id : 20002

Question 6

In a classroom the number of girls is 20% more than that of the boys. The strength of the class is 66. If 4 more girls are admitted to the class, the ratio of the number of boys to that the girls is:

Answer :

(A) 1:2

(B) 1:4

(C) 3:5

(D) 3:4

Question Id : 16

Option Id

☐ 16001

☐ 16002

☐ 16003

☐ 16004

Right Answer :
3:4

Right Option Id : 16004

Question 7

A can complete a certain job in 12 days. If B is 60% more efficient than A, then the time taken by B alone to complete the same job is:

Answer :

(A) $8\frac{1}{2}$ days

(B) 8 days

(C) 7 days

(D) $7\frac{1}{2}$ days

Question Id : 22

Option Id

☐ 22001

☐ 22002

☐ 22003

☐ 22004

Right Answer :
 $7\frac{1}{2}$ days

Right Option Id : 22004

Question 8

Odd man out:

16, 25, 36, 72, 144, 196, 225

Answer :

(A) 36

(B) 72

(C) 196

(D) 225

Question Id : 23

Option Id

☐ 23001

☐ 23002

☐ 23003

☐ 23004

Right Answer :

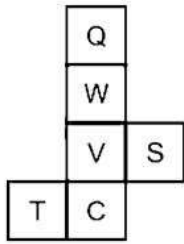
72

Right Option Id : 23002

Question 9

Question Id : 24

Which of the following pairs of letters will be on the opposite faces when the given sheet is folded to form a cube?



Answer :

(A) T and V

(B) Q and S

(C) C and W

(D) S and C

Option Id

☐ 24001

☐ 24002

☐ 24003

☐ 24004

Right Answer :

C and W

Right Option Id : 24003

Question 10

Question Id : 25

One card is drawn from a well shuffled deck of 52 cards. If each outcome is equally likely, what is the probability that card will not be a diamond?

Answer :

(A) $\frac{3}{4}$

(B) $\frac{1}{2}$

(C) 1

(D) $\frac{4}{3}$

Option Id

☐ 25001

☐ 25002

☐ 25003

☐ 25004

Right Answer :

$\frac{3}{4}$

Right Option Id : 25001

Question 11

Question Id : 17

Sachin is younger than Rahul by 6 years. If the ratio of their ages is 7:9. Find the age of Sachin.

Answer :

(A) 23

(B) 21

(C) 12

(D) 14

Option Id

☐ 17001

☐ 17002

☐ 17003

☐ 17004

Right Answer :

21

Right Option Id : 17002

Question 12

Question Id : 15

How many kilograms of sugar costing Rs. 9 per kg must be mixed with 27 kg of sugar costing Rs. 7 per kg so that there may be a gain of 10% by selling the mixture at Rs. 9.24 per kg?

Answer :

(A) 36 kg

(B) 42 kg

Option Id

☐ 15001

☐ 15002

(C) 54 kg

☐ 15003

(D) 63 kg

☐ 15004

Right Answer :
63 kg

Right Option Id : 15004

Question 13

In how many different ways can the letters of the word "CANCER" be arranged?

Answer :

(A) 720

Option Id

☐ 2001

(B) 360

☐ 2002

(C) 180

☐ 2003

(D) 120

☐ 2004

Right Answer :
360

Right Option Id : 2002

Question Id : 2

Question 14

Product of two co-prime numbers is 899. Their HCF should be:

Answer :

(A) 899

Option Id

☐ 13001

(B) 1

☐ 13002

(C) 29

☐ 13003

(D) 33

☐ 13004

Right Answer :
1

Right Option Id : 13002

Question Id : 13

Question 15

A bus moves along the four sides of a square at the speeds of 200, 200, 200, 100 km/hr. Find the average speed of the bus around the field in km/hr.

Answer :

(A) 160

Option Id

☐ 12001

(B) 200

☐ 12002

(C) 280

☐ 12003

(D) 320

☐ 12004

Right Answer :
160

Right Option Id : 12001

Question Id : 12

Question 16

A train passes a station platform in 36 seconds and a man standing on the platform in 20 seconds. If the speed of the train is 54 km/hr, what is the length of the platform?

Answer :

(A) 120 m

Option Id

☐ 11001

(B) 240 m

☐ 11002

(C) 300 m

☐ 11003

(D) None of these

☐ 11004

Question Id : 11

Right Answer :
240 m

Right Option Id : 11002

Question 17

A pump can fill a tank with water in 2 hours. Because of a leak, it took $2\frac{1}{3}$ hours to fill the tank. The leak can drain all the water of the tank in ____ hours:

Answer :

- (A) $4\frac{1}{3}$ Hours
(B) 7 hours
(C) 8 hours
(D) 14 hours

Question Id : 10

Option Id

- ☐ 10001
☐ 10002
☐ 10003
☐ 10004

Right Answer :
14 hours

Right Option Id : 10004

Question 18

$(25)^{7.5} \times (5)^{2.5} \div (125)^{1.5} = 5^?$

Answer :

- (A) 8.5
(B) 13
(C) 16
(D) 17.5

Question Id : 9

Option Id

- ☐ 9001
☐ 9002
☐ 9003
☐ 9004

Right Answer :
13

Right Option Id : 9002

Question 19

Find the compound interest (in Rs.) on Rs. 8200 at 11% per annum for 2 years.

Answer :

- (A) 1960.78
(B) 1896.23
(C) 1920.25
(D) 1903.22

Question Id : 8

Option Id

- ☐ 8001
☐ 8002
☐ 8003
☐ 8004

Right Answer :
1903.22

Right Option Id : 8004

Question 20

A goods train runs at the speed of 72 kmph and crosses a 250 m long platform in 26 seconds. What is the length of the goods train?

Answer :

- (A) 230 m
(B) 240 m
(C) 260 m
(D) 270 m

Question Id : 7

Option Id

- ☐ 7001
☐ 7002
☐ 7003
☐ 7004

Right Answer :
270 m

Right Option Id : 7004

Question 21

Find the surface area (in cm^2) of a sphere having radius 6 cm.

Answer :

- (A) 36π
- (B) 122π
- (C) 98π
- (D) 144π

Right Answer :

144π

Question Id : 6

Option Id

- ☐ 6001
- ☐ 6002
- ☐ 6003
- ☐ 6004

Right Option Id : 6004

Question 22

A man covers half of his journey at 7 km/hr and the remaining half at 9 km/hr. His average speed (in km/hr) is:

Answer :

- (A) $65 / 6$
- (B) $67 / 5$
- (C) $63 / 8$
- (D) $65 / 8$

Right Answer :

$63 / 8$

Question Id : 5

Option Id

- ☐ 5001
- ☐ 5002
- ☐ 5003
- ☐ 5004

Right Option Id : 5003

Question 23

$\frac{958}{9.58} = \frac{95.8}{x}$, then $x = ?$

Answer :

- (A) 958
- (B) 0.958
- (C) 9.58
- (D) 95.8

Right Answer :

0.958

Question Id : 4

Option Id

- ☐ 4001
- ☐ 4002
- ☐ 4003
- ☐ 4004

Right Option Id : 4002

Question 24

In an election between two candidates, the winner got 69% of total vote cast and won the election by a majority of 3420 votes. What is the total number of votes cast if no vote is declared invalid?

Answer :

- (A) 8000
- (B) 14000
- (C) 12000
- (D) 9000

Right Answer :

9000

Question Id : 14

Option Id

- ☐ 14001
- ☐ 14002
- ☐ 14003
- ☐ 14004

Right Option Id : 14004

Question 25

Question Id : 3

If 12 men complete the full work in 10 days when they work 6 hours per day, in how many days 8 men complete the full work (in days) when they work 7 hours per day?

Answer :

(A) 95 / 11

(B) 90 / 11

(C) 90 / 7

(D) 95 / 7

Option Id

☐ 3001

☐ 3002

☐ 3003

☐ 3004

Right Answer :

90 / 7

Right Option Id : 3003

SECTION 2

Question 26

Which among the following institutions has recently launched a Financial Inclusion Dashboard named "ANTARDRISHTI" to assess and monitor the progress of financial inclusion?

Answer :

(A) RBI (Reserve Bank of India)

(B) SEBI (Securities and Exchange Board of India)

(C) EXIM (Export-Import Bank of India)

(D) SIDBI (Small Industries Development Bank of India)

Question Id : 47

Option Id

☐ 47001

☐ 47002

☐ 47003

☐ 47004

Right Answer :

RBI (Reserve Bank of India)

Right Option Id : 47001

Question 27

The 4th edition of the Space Economy Leaders Meeting had taken place at _____ as a part of India's G20 Presidency.

Answer :

(A) pune

(B) chennai

(C) hyderabad

(D) bengaluru

Question Id : 46

Option Id

☐ 46001

☐ 46002

☐ 46003

☐ 46004

Right Answer :

bengaluru

Right Option Id : 46004

Question 28

Name the theme for "India Mobile Congress (IMC) 2023".

Answer :

(A) Global India, Digital India

(B) Global Digital Innovation

(C) Global Artificial Intelligence Innovation

(D) Global Technology Innovation

Question Id : 45

Option Id

☐ 45001

☐ 45002

☐ 45003

☐ 45004

Right Answer :

Global Digital Innovation

Right Option Id : 45002

Question 29

Recently, Government of India and which among the following countries has signed MoU in the field of Medical Products Regulation?

Answer :

Question Id : 44

Option Id

(A) Tanzania

☐ 44001

(B) Egypt

☐ 44002

(C) Suriname

☐ 44003

(D) Bangladesh

☐ 44004

Right Answer :

Suriname

Right Option Id : 44003

Question 30

Question Id : 43

Which among the following country has done an agreement to utilize their respective local currencies for cross-border transactions with India?

Answer :

Option Id

(A) France

☐ 43001

(B) USA

☐ 43002

(C) UAE (United Arab Emirates)

☐ 43003

(D) UK

☐ 43004

Right Answer :

UAE (United Arab Emirates)

Right Option Id : 43003

Question 31

Question Id : 37

The Ghadar Party was founded in November 1913 by_____.

Answer :

Option Id

(A) Lala Har Dayal & Madam Bhikaji Cama

☐ 37001

(B) Lala Har Dayal & Sohan Singh Bhakna

☐ 37002

(C) Lala Har Dayal & Udham Singh

☐ 37003

(D) Lala Har Dayal & Gadar Singh

☐ 37004

Right Answer :

Lala Har Dayal & Sohan Singh Bhakna

Right Option Id : 37002

Question 32

Question Id : 42

In which of the following states, world's largest river island is located?

Answer :

Option Id

(A) Kerala

☐ 42001

(B) Madhya Pradesh

☐ 42002

(C) Assam

☐ 42003

(D) Goa

☐ 42004

Right Answer :

Assam

Right Option Id : 42003

Question 33

Question Id : 41

In which schedule of the Indian Constitution powers of panchayats are stated?

Answer :

Option Id

(A) 11th schedule

☐ 41001

(B) 10th schedule

☐ 41002

(C) 9th schedule

(D) 8th schedule

☐ 41003

☐ 41004

Right Answer :
11th schedule

Right Option Id : 41001

Question 34

In word, which case removes all capitalizations from the selection?

Answer :

(A) Sentence case

(B) lowercase

(C) UPPERCASE

(D) Delete Text

Question Id : 40

Option Id

☐ 40001

☐ 40002

☐ 40003

☐ 40004

Right Answer :
lowercase

Right Option Id : 40002

Question 35

Which of the following was the first electronic computer developed in 1946?

Answer :

(A) UNIVAC

(B) ENIAC

(C) Havard mark-1

(D) Atanasoff-berry computer

Question Id : 39

Option Id

☐ 39001

☐ 39002

☐ 39003

☐ 39004

Right Answer :
ENIAC

Right Option Id : 39002

Question 36

Which of the following is not a defect of vision?

Answer :

(A) Myopia

(B) Hypermetropia

(C) Presbyopia

(D) Persistence of Vision

Question Id : 38

Option Id

☐ 38001

☐ 38002

☐ 38003

☐ 38004

Right Answer :
Persistence of Vision

Right Option Id : 38004

Question 37

The Original Indian Constitution was hand-written by whom among the following?

Answer :

(A) Dr B. R. Ambedkar

(B) Prem Behari Narain Raizada

(C) Bala Saheb Gangadhar Kher

(D) Vijaya Laxmi Pandit

Question Id : 27

Option Id

☐ 27001

☐ 27002

☐ 27003

☐ 27004

Right Answer :
Prem Behari Narain Raizada

Right Option Id : 27002

Question 38

Who among the following established "India House-a student residence" in London in year 1905?

Answer :

- (A) Shyamji Krishna Varma
- (B) Madan Lal Dhingra
- (C) Madam Bhikaiji Kama
- (D) Chittaranjan Das

Question Id : 36

Option Id

- ☐ 36001
- ☐ 36002
- ☐ 36003
- ☐ 36004

Right Answer :
Shyamji Krishna Varma

Right Option Id : 36001

Question 39

Many networks are built around a central computer called as ____.

Answer :

- (A) LAN
- (B) Server
- (C) Big Computer
- (D) Computer

Question Id : 35

Option Id

- ☐ 35001
- ☐ 35002
- ☐ 35003
- ☐ 35004

Right Answer :
Server

Right Option Id : 35002

Question 40

In which among the following layers of the atmosphere, Ozone layer is present to protect us against harmful UV-Ultra Violet rays?

Answer :

- (A) Troposphere
- (B) Stratosphere
- (C) Mesosphere
- (D) Thermosphere

Question Id : 34

Option Id

- ☐ 34001
- ☐ 34002
- ☐ 34003
- ☐ 34004

Right Answer :
Stratosphere

Right Option Id : 34002

Question 41

In the state of India, the State Financial Corporation has given assistance mainly to develop which of the following?

Answer :

- (A) agricultural farms
- (B) cottage industry
- (C) large-scale industries
- (D) medium and small-scale industries

Question Id : 33

Option Id

- ☐ 33001
- ☐ 33002
- ☐ 33003
- ☐ 33004

Right Answer :
medium and small-scale industries

Right Option Id : 33004

Question 42

Question Id : 32

The rate at which the Reserve Bank of India lends money to commercial banks is called as ____.

Answer :

- (A) CRR
- (B) Reverse repo rate
- (C) Repo rate
- (D) SLR

Option Id

- ☐ 32001
- ☐ 32002
- ☐ 32003
- ☐ 32004

Right Answer :

Repo rate

Right Option Id : 32003

Question 43

Which of the following entities has the authority to transfer any case to any location in India?

Answer :

- (A) Parliament
- (B) Prime Minister
- (C) Supreme Court
- (D) Home Minister

Question Id : 31

Option Id

- ☐ 31001
- ☐ 31002
- ☐ 31003
- ☐ 31004

Right Answer :

Supreme Court

Right Option Id : 31003

Question 44

The words Satyameva Jayate in the State Emblem adopted by the Government of India have been taken from which Upanishad?

Answer :

- (A) Vijayo Upanishad
- (B) Mundaka Upanishad
- (C) Dharmo Upanishad
- (D) Prasna Upanishad

Question Id : 30

Option Id

- ☐ 30001
- ☐ 30002
- ☐ 30003
- ☐ 30004

Right Answer :

Mundaka Upanishad

Right Option Id : 30002

Question 45

What is the common ingredient in antacid, mild abrasive in tooth paste, a constituent of chewing gum, and a filler in cosmetics?

Answer :

- (A) Ascorbic acid
- (B) Sodium bicarbonate
- (C) Calcium carbonate
- (D) Magnesium sulphate

Question Id : 29

Option Id

- ☐ 29001
- ☐ 29002
- ☐ 29003
- ☐ 29004

Right Answer :

Calcium carbonate

Right Option Id : 29003

Question 46

As per Forest Report Survey 2021 which of the following states having a largest area of forest cover in India?

Answer :

- (A) Uttar Pradesh

Question Id : 28

Option Id

- ☐ 28001

(B) Haryana

☐ 28002

(C) Assam

☐ 28003

(D) Madhya Pradesh

☐ 28004

Right Answer :

Madhya Pradesh

Right Option Id : 28004

Question 47

Gandak river is associated with one of the following river systems?

Answer :

(A) Brahmaputra

Option Id

☐ 26001

(B) Indus

☐ 26002

(C) Godavari

☐ 26003

(D) Ganga

☐ 26004

Right Answer :

Ganga

Right Option Id : 26004

Question 48

Indira Gandhi Memorial Tulip Garden situated in Srinagar is the largest Tulip Garden in Asia was previously known as ____.

Answer :

(A) Tulip Centre

Option Id

☐ 49001

(B) Model Floriculture Centre

☐ 49002

(C) Valley of Flower

☐ 49003

(D) Kashmir Garden

☐ 49004

Right Answer :

Model Floriculture Centre

Right Option Id : 49002

Question 49

Which among the following is not correct for Lonar Lake?

Answer :

(A) It is a notified National Geo-heritage lake.

Option Id

☐ 48001

(B) It has been declared as Wildlife Sanctuary for the conservation of lake.

☐ 48002

(C) Its water is mild acidic.

☐ 48003

(D) It was created due to meteorite.

☐ 48004

Right Answer :

Its water is mild acidic.

Right Option Id : 48003

Question 50

What do you mean by Silviculture?

Answer :

(A) It is a science of growing silkworms.

Option Id

☐ 50001

(B) It is a science of rearing sheep.

☐ 50002

(C) It is a science of fish farming.

☐ 50003

(D) It is a science of forest farming.

☐ 50004

Right Answer :

It is a science of forest farming.

Right Option Id : 50004

SECTION 3

Question 51

A is son of B, C is sister of A , how B is related to C?

Answer :

- (A) Father
(B) Son
(C) Brother
(D) Uncle

Question Id : 53

Option Id

- ☐ 53001
☐ 53002
☐ 53003
☐ 53004

Right Answer :

Father

Right Option Id : 53001

Question 52

If + denotes \div , - denotes \times , \times denotes - and \div denotes +, then $35+7-5\div 5\times 6=?$

Answer :

- (A) 23
(B) 22
(C) 24
(D) 21

Question Id : 71

Option Id

- ☐ 71001
☐ 71002
☐ 71003
☐ 71004

Right Answer :

24

Right Option Id : 71003

Question 53

Select the answer from given options that can replace the question mark (?) in the following series. YWE, WTG, TOJ, OHO, HYV, (?)

Answer :

- (A) XMF
(B) ZMG
(C) ZMD
(D) WNG

Question Id : 68

Option Id

- ☐ 68001
☐ 68002
☐ 68003
☐ 68004

Right Answer :

WNG

Right Option Id : 68004

Question 54

Select a suitable figure from the Answer Figures that would replace the question mark (?).

Problem Figures:

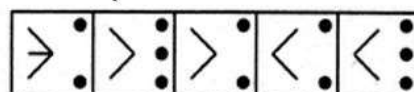
समस्या आकृति:



(A) (B) (C) (D)

Answer Figures:

उत्तर आकृति:



(1) (2) (3) (4) (5)

Question Id : 69

Answer :

- (A) 1
(B) 2

Option Id

- ☐ 69001
☐ 69002

(C) 3

☐ 69003

(D) 4

☐ 69004

Right Answer :

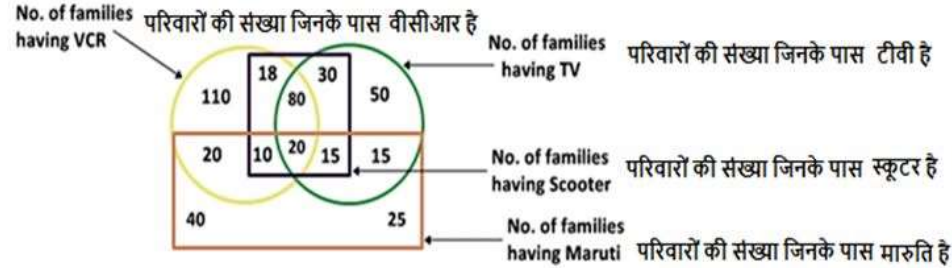
3

Right Option Id : 69003

Question 55

Question Id : 70

What does the area marked '30' in the figure given below represents?



Answer :

(A) Number of families which have scooter, TV and Maruti

(B) Number of families which have TV and scooter both but have neither VCR nor Maruti

(C) Number of families which have TV and VCR but don't have Maruti

(D) Number of families which have scooter, TV and VCR but don't have Maruti

Option Id

☐ 70001

☐ 70002

☐ 70003

☐ 70004

Right Answer :

Number of families which have TV and scooter both but have neither VCR nor Maruti

Right Option Id : 70002

Question 56

Question Id : 66

Choose the correct water image of the question figure, from the given answer figures (assume that water is along XY)

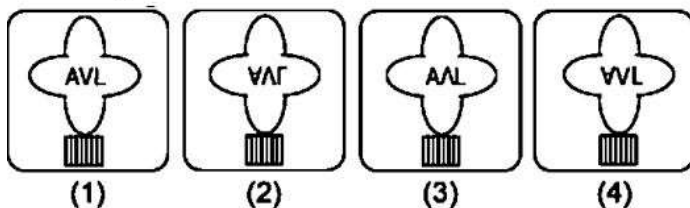
Problem figure:

समस्या आकृति:



उत्तर आकृति:

Answer figures:



Answer :

(A) 1

(B) 2

(C) 3

(D) 4

Option Id

☐ 66001

☐ 66002

☐ 66003

☐ 66004

Right Answer :

2

Right Option Id : 66002

Question 57

In a school of 1250 students, 50% of the students take a history class and 50% of the students take an economics class. If 450 students take neither history nor economics class, then how many students take both history and economics?

Answer :

- (A) 500
(B) 350
(C) 400
(D) 450

Question Id : 72

Option Id

- ☐ 72001
☐ 72002
☐ 72003
☐ 72004

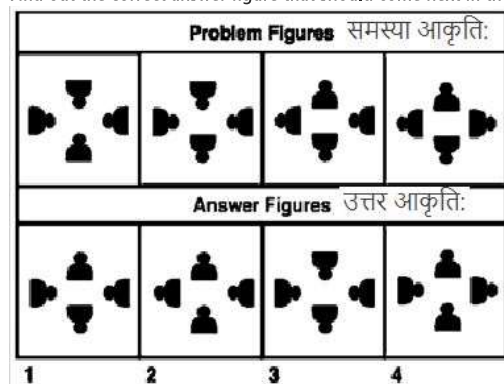
Right Answer :

450

Right Option Id : 72004

Question 58

Find out the correct answer figure that should come next in the sequence of problem figures.



Answer :

- (A) 1
(B) 2
(C) 3
(D) 4

Option Id

- ☐ 73001
☐ 73002
☐ 73003
☐ 73004

Right Answer :

4

Right Option Id : 73004

Question 59

Choose the alternative which closely resembles the mirror image of the given combination.

TARAIN1014A

(1) A4101N1ART

(3) A1014ARTAN

(2) A1014N1ART

(4) A4101N1ART

Answer :

- (A) 1
(B) 2
(C) 3
(D) 4

Question Id : 74

Option Id

- ☐ 74001
☐ 74002
☐ 74003
☐ 74004

Right Answer :

4

Right Option Id : 74004

Question 60

Question Id : 75

Select a suitable figure from the Answer Figures that would replace the question mark (?).

Problem figure:

समस्या आकृति:



Answer figures:

उत्तर आकृति:



(1)

(2)

(3)

(4)

Answer :

(A) 1

(B) 2

(C) 3

(D) 4

Option Id

☐ 75001

☐ 75002

☐ 75003

☐ 75004

Right Answer :

3

Right Option Id : 75003

Question 61

Question Id : 67

Select a suitable figure from the Answer Figures that would replace the question mark (?).

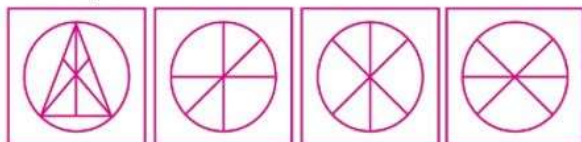
Problem figure:

समस्या आकृति:



Answer figures:

उत्तर आकृति:



Answer :

(A) 1

(B) 2

(C) 3

(D) 4

Option Id

☐ 67001

☐ 67002

☐ 67003

☐ 67004

Right Answer :

3

Right Option Id : 67003

Question 62

Question Id : 65

Here is the information given below. Based on this information answer the question.

I. A cube has six sides, each of which has a different colour: black, brown, green, red, white, and blue.

- II. The red side is opposite the black.
 III. The green side is between the red and the black.
 IV. The brown side is adjacent to the blue.
 V. The blue side is adjacent to the white.
 VI. The red side is the bottom face.

Which of the following colour is opposite to Brown?

Answer :

(A) Blue

(B) White

(C) Green

(D) Red

Option Id

☐ 65001

☐ 65002

☐ 65003

☐ 65004

Right Answer :

White

Right Option Id : 65002

Question 63

If A=2, B=3, C=4, D=5, E=6, ..., Z = 27 and INDIA = 6000, then INDIAN=

Answer :

(A) 90000

(B) 60000

(C) 10000

(D) 80000

Question Id : 52

Option Id

☐ 52001

☐ 52002

☐ 52003

☐ 52004

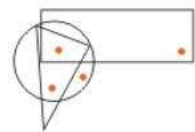
Right Answer :

90000

Right Option Id : 52001

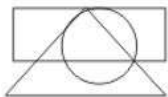
Question 64

Which of the following answer figures marked as option (A), (B), (C) and (D) satisfies the same condition of placement of dots as in the Question Figure?

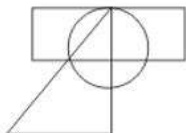


Answer :

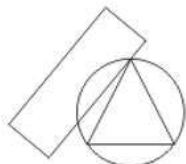
(A)



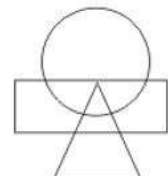
(B)



(C)



(D)



Option Id

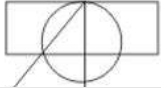
☐ 63001

☐ 63002

☐ 63003

☐ 63004

Right Answer :



Right Option Id : 63002

Question 65

Identify the figure that completes the pattern.



Answer :

(A) (1)

(B) (2)

(C) (3)

(D) (4)

Question Id : 62

Option Id

☐ 62001

☐ 62002

☐ 62003

☐ 62004

Right Answer :

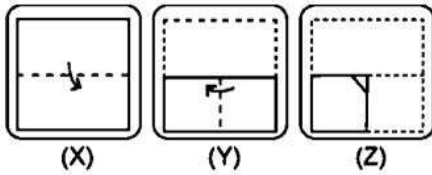
(4)

Right Option Id : 62004

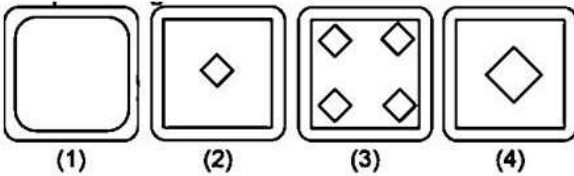
Question 66

Following question consists of a set of three figures X, Y and Z showing a sequence of folding of a piece of paper. Figure Z shows the manner in which the folded paper has been cut.

Choose a figure which most closely resembles the unfolded form of figure Z from the four answer figures given below.



Answer Figures: उत्तर आकृतियाँ:



Answer :

(A) 1

(B) 2

(C) 3

(D) 4

Option Id

☐ 61001

☐ 61002

☐ 61003

☐ 61004

Right Answer :

2

Right Option Id : 61002

Question 67

In a certain code language, if the word FANTASTIC is coded as SMZEBDJUT, then how is the word DIRECTION coded in that language?

Answer :

(A) EHQDDUJPO

(B) DQHCDOPIU

(C) DQHEUJPOD

(D) DOPJUDQHE

Question Id : 60

Option Id

☐ 60001

☐ 60002

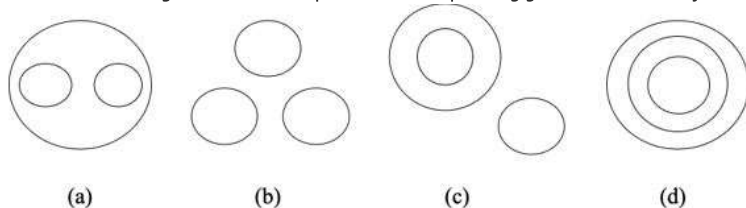
☐ 60003

Right Answer :

DQHCDOPJU

Right Option Id : 60002**Question 68**

Choose the Venn diagram which best explains relationship among given items: India, Rajasthan, Udaipur

Question Id : 64**Answer :**

(A) (a)

(B) (b)

(C) (c)

(D) (d)

Option Id☐ 64001☐ 64002☐ 64003☐ 64004**Right Answer :**

(d)

Right Option Id : 64004**Question 69****Question Id : 59**

The school principal has received complaints from parents about bullying in the school yard during recess. He wants to investigate and end this situation as soon as possible, so he has asked the recess aides to watch closely.

Which situation should the recess aides report to the principal?

Answer :

(A) A girl is sitting glumly on a bench reading a book and not interacting with her peers.

(B) Four girls are surrounding another girl and seem to have possession of her backpack.

(C) Two boys are playing a one-on-one game of basketball and are arguing over the last basket scored.

(D) Three boys are huddled over a handheld video game, which isn't supposed to be on school grounds.

Option Id☐ 59001☐ 59002☐ 59003☐ 59004**Right Answer :**

Four girls are surrounding another girl and seem to have possession of her backpack.

Right Option Id : 59002**Question 70****Question Id : 58**

Find suitable answer in place of question mark.

16 : 22 :: 36 : ?

Answer :

(A) 43

(B) 26

(C) 53

(D) 46

Option Id☐ 58001☐ 58002☐ 58003☐ 58004**Right Answer :**

46

Right Option Id : 58004**Question 71****Question Id : 57**

You are in a recruitment team of a government organisation and have received an anonymous gift of Rs 1 lakh. The recruitment process is going on but you have not got any indication about the sender of this gift. In such a situation, you will:

Answer :

- (A) Donate this money to the orphanage.
- (B) Take this money and use it for personal purpose.
- (C) Try to find out the sender and return the money.
- (D) None of the above

Option Id

- ☐ 57001
- ☐ 57002
- ☐ 57003
- ☐ 57004

Right Answer :

None of the above

Right Option Id : 57004

Question 72

Question Id : 56

In the question below are given three statements followed by three conclusions I, II and III. You have to take the given statements to be true even if they seem to be at variance from commonly known facts. Read all the conclusions and then decide which of the given conclusions logically follows from the given statements disregarding commonly known facts.

Statements: All schools are colleges. Some universities are institutions. No school is university.

Conclusions:

- I. All colleges are universities is not a possibility.
- II. No college is university is not a possibility.
- III. Some institutions are not schools is not a possibility.

Answer :

Option Id

- (A) Only I and II follows
- (B) Only II follows
- (C) Only III follows
- (D) Only I and III follows

- ☐ 56001
- ☐ 56002
- ☐ 56003
- ☐ 56004

Right Answer :

Only I and III follows

Right Option Id : 56004

Question 73

Question Id : 55

A clock is set right at 6 A.M. The clock loses 12 minutes in 24 hours. What will be the true time when the clock indicates 8 P.M. on 4th day?

Answer :

Option Id

- (A) 9 : 17 P.M
- (B) 8 : 43 P.M
- (C) 7 : 17 P.M
- (D) 8 : 17 P.M

- ☐ 55001
- ☐ 55002
- ☐ 55003
- ☐ 55004

Right Answer :

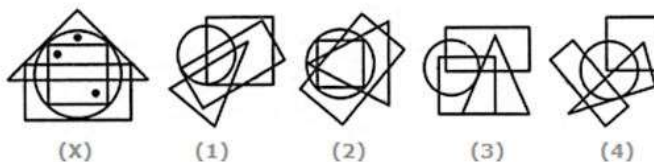
8 : 43 P.M

Right Option Id : 55002

Question 74

Question Id : 54

Select the figure which satisfies the same conditions of placement of dots as in figure – X.



Answer :

Option Id

- (A) 1
- (B) 2
- (C) 3
- (D) 4

- ☐ 54001
- ☐ 54002
- ☐ 54003
- ☐ 54004

Right Answer :

2

Right Option Id : 54002

Question 75

From the given answer figures, select the one in which the question figure is hidden/embedded.

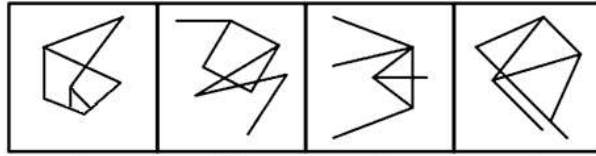
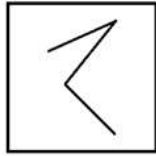
Question Id : 51

Question figure:

Answer figures:

प्रश्न आकृति:

उत्तर आकृतियाँ:



A

B

C

D

Answer :

(A) D

(B) C

(C) B

(D) A

Option Id

☐ 51001

☐ 51002

☐ 51003

☐ 51004

Right Answer :

D

Right Option Id : 51001

SECTION 4

Question 76

Choose the correct antonym: "cease"

Question Id : 99

Answer :

Option Id

(A) start

☐ 99001

(B) unkind

☐ 99002

(C) accept

☐ 99003

(D) increase

☐ 99004

Right Answer :

start

Right Option Id : 99001

Question 77

Choose the correct antonym: "charm"

Question Id : 98

Answer :

Option Id

(A) doubt

☐ 98001

(B) honest

☐ 98002

(C) repel

☐ 98003

(D) end

☐ 98004

Right Answer :

repel

Right Option Id : 98003

Question 78

Question Id : 97

Choose the correct synonym of: "accelerate"

Answer :

(A) friendly

(B) Swell

(C) enquiry

(D) humane

Option Id

☐ 97001

☐ 97002

☐ 97003

☐ 97004

Right Answer :

Swell

Right Option Id : 97002

Question 79

Choose the correct synonym of: "brittle"

Answer :

(A) dominate

(B) flaky

(C) talent

(D) activity

Question Id : 96

Option Id

☐ 96001

☐ 96002

☐ 96003

☐ 96004

Right Answer :

flaky

Right Option Id : 96002

Question 80

Change the following sentence into passive voice.:

It is time to ring the bell.

Answer :

(A) It is time the bell rings.

(B) It is being time to ring the bell.

(C) It is time for the bell to ring.

(D) It is time for the bell to be rung.

Question Id : 95

Option Id

☐ 95001

☐ 95002

☐ 95003

☐ 95004

Right Answer :

It is time for the bell to be rung.

Right Option Id : 95004

Question 81

Change the following sentence into passive voice.:

Do not insult the weak.

Answer :

(A) Let the weak not be insulted.

(B) Let's not insult the weak.

(C) Let not the weak be insulted.

(D) Let the weak not be insulted by us.

Question Id : 94

Option Id

☐ 94001

☐ 94002

☐ 94003

☐ 94004

Right Answer :

Let the weak not be insulted.

Right Option Id : 94001

Question 82

Give one word substitute of: "Rules for formal behaviour among people."

Answer :

(A) Etiquette

Question Id : 93

Option Id

- (B) Shimmer
- (C) Credibility
- (D) Apprehensive

- ☐ 93001
- ☐ 93002
- ☐ 93003
- ☐ 93004

Right Answer :
Etiquette

Right Option Id : 93001

Question 83

Give one word substitute of: "Temple dedicated to all the gods."

Answer :

- (A) pantheon
- (B) marble
- (C) sacred
- (D) impeccable

Question Id : 92

Option Id

- ☐ 92001
- ☐ 92002
- ☐ 92003
- ☐ 92004

Right Answer :
pantheon

Right Option Id : 92001

Question 84

Find out the incorrect spelling.

Answer :

- (A) Sandwich
- (B) Sculpture
- (C) Secrecy
- (D) Sovereign

Question Id : 91

Option Id

- ☐ 91001
- ☐ 91002
- ☐ 91003
- ☐ 91004

Right Answer :
Sandwitch

Right Option Id : 91001

Question 85

Find out the incorrect spelling.

Answer :

- (A) Simbol
- (B) Sweater
- (C) Syllable
- (D) Syringe

Question Id : 90

Option Id

- ☐ 90001
- ☐ 90002
- ☐ 90003
- ☐ 90004

Right Answer :
Simbol

Right Option Id : 90001

Question 86

Choose the correct article:

"Mr. Singh returned to India and bought ____ house in Delhi."

Answer :

- (A) a
- (B) an
- (C) the

Question Id : 89

Option Id

- ☐ 89001
- ☐ 89002
- ☐ 89003

(D) No article

☐ 89004

Right Answer :

a

Right Option Id : 89001

Question 87

Choose the correct reported speech:

"The airline official said, "We are extremely sorry that the flight has been delayed due to heavy floods."

Answer :

(A) The airline official announced that we are extremely sorry that the flight has been delayed due to heavy floods.

(B) The airline official announced that they were extremely sorry that the flight had been delayed due to heavy floods.

(C) The airline official announced the airline is extremely sorry that the flight will be delayed due to heavy floods.

(D) The airline official announces they are extremely sorry that the flight has been delayed due to heavy floods.

Question Id : 76

Option Id

☐ 76001

☐ 76002

☐ 76003

☐ 76004

Right Answer :

The airline official announced that they were extremely sorry that the flight had been delayed due to heavy floods.

Right Option Id : 76002

Question 88

Choose the correct verb form:

"The wind ____ heavily yesterday."

Answer :

(A) blow

(B) blew

(C) blown

(D) was blow

Question Id : 87

Option Id

☐ 87001

☐ 87002

☐ 87003

☐ 87004

Right Answer :

blew

Right Option Id : 87002

Question 89

Choose the correct article:

" ____ President of USA will be visiting India next month."

Answer :

(A) A

(B) An

(C) The

(D) no article

Question Id : 86

Option Id

☐ 86001

☐ 86002

☐ 86003

☐ 86004

Right Answer :

The

Right Option Id : 86003

Question 90

Choose the correct meaning of the idiom or phrase given:

A pipe dream

Answer :

(A) A pleasant dream

(B) A bad dream

(C) An impracticable plan

Question Id : 85

Option Id

☐ 85001

☐ 85002

☐ 85003

(D) A foolish idea

☐ 85004

Right Answer :

An impracticable plan

Right Option Id : 85003

Question 91

Choose the correct meaning of the idiom or phrase given.:

A fair crack of the whip

Answer :

(A) Severe punishment

(B) A good check

(C) Giving equal chance

(D) Failure of administration

Question Id : 84

Option Id

☐ 84001

☐ 84002

☐ 84003

☐ 84004

Right Answer :

Giving equal chance

Right Option Id : 84003

Question 92

Fill in the blank with the correct preposition:

I am very fond ___ drinking green tea.

Answer :

(A) for

(B) of

(C) about

(D) at

Question Id : 83

Option Id

☐ 83001

☐ 83002

☐ 83003

☐ 83004

Right Answer :

of

Right Option Id : 83002

Question 93

Fill in the blank with the correct preposition:

He is ___ the kitchen and cooking.

Answer :

(A) in

(B) at

(C) above

(D) below

Question Id : 82

Option Id

☐ 82001

☐ 82002

☐ 82003

☐ 82004

Right Answer :

in

Right Option Id : 82001

Question 94

Fill in the blanks with suitable option.:

As a result of the _____, no one can trade with this country.

Answer :

(A) enigma

(B) embargo

(C) vicious

(D) voracious

Question Id : 81

Option Id

☐ 81001

☐ 81002

☐ 81003

Right Answer :

embargo

Right Option Id : 81002

Question 95

Fill in the blanks with suitable option.:
Birds are _____ recognizable creatures.

Answer :

(A) thoughtfully

(B) instantly

(C) nicely

(D) beautifully

Question Id : 80

Option Id

☐ 80001

☐ 80002

☐ 80003

☐ 80004

Right Answer :

instantly

Right Option Id : 80002

Question 96

Which part of the sentence is incorrect? :
"The mobile needing to be charged."

Answer :

(A) The mobile

(B) needing to

(C) be recharged.

(D) No error

Question Id : 79

Option Id

☐ 79001

☐ 79002

☐ 79003

☐ 79004

Right Answer :

needing to

Right Option Id : 79002

Question 97

Which part of the sentence is incorrect?:
"The remote control has stopped functioning."

Answer :

(A) The remote

(B) control has

(C) stopped functioning.

(D) No error

Question Id : 78

Option Id

☐ 78001

☐ 78002

☐ 78003

☐ 78004

Right Answer :

No error

Right Option Id : 78004

Question 98

Choose the correct conjunction:
"The doctor had left ____ the patient was admitted."

Answer :

(A) or

(B) unless

(C) before

(D) that

Question Id : 77

Option Id

☐ 77001

☐ 77002

☐ 77003

☐ 77004

Right Answer :
before

Right Option Id : 77003

Question 99

Choose the correct conjunction:

"She abused me ___ threatened to beat me."

Answer :

- (A) whence
- (B) when
- (C) but
- (D) as well as

Question Id : 88

Option Id

- ☐ 88001
- ☐ 88002
- ☐ 88003
- ☐ 88004

Right Answer :
as well as

Right Option Id : 88004

Question 100

Select the option to make the sentence correct:

"Mira likes very much chocolates."

Answer :

- (A) Mira likes very chocolates much.
- (B) Mira likes much chocolates very.
- (C) Mira very likes chocolates much.
- (D) Mira likes chocolates very much.

Question Id : 100

Option Id

- ☐ 100001
- ☐ 100002
- ☐ 100003
- ☐ 100004

Right Answer :
Mira likes chocolates very much.

Right Option Id : 100004