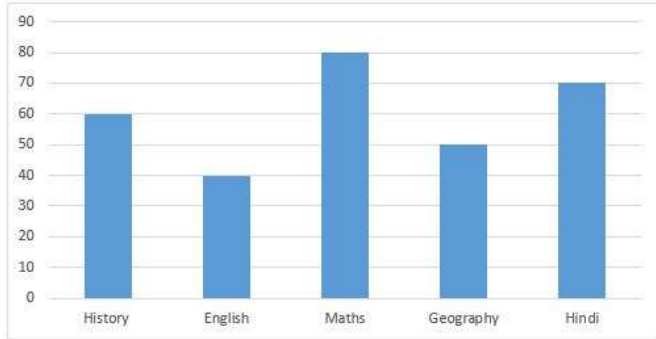


SECTION 1

Question 1

Question Id : 1

Direction : The bar graph shows the marks obtained by a student in an examination out of 100 marks in each subject. Study the diagram and answer the question.



The ratio of the marks of Maths and History is:

Answer :

(A) 8:5

(B) 3:4

(C) 4:3

(D) 6:5

Option Id

☐ 1001

☐ 1002

☐ 1003

☐ 1004

Right Answer :

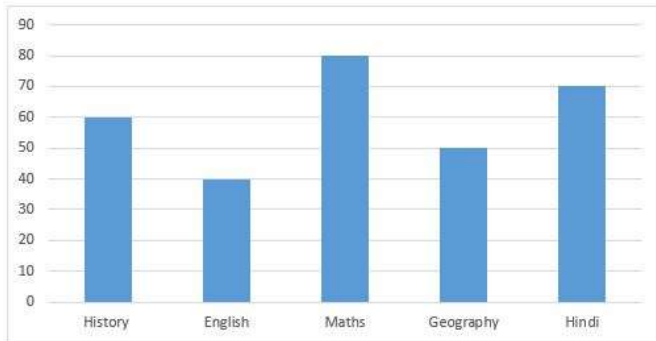
4:3

Right Option Id : 1003

Question 2

Question Id : 21

Direction : The bar graph shows the marks obtained by a student in an examination out of 100 marks in each subject. Study the diagram and answer the question.



The average of marks of Hindi and English is

Answer :

(A) 50

(B) 55

(C) 60

(D) 65

Option Id

☐ 21001

☐ 21002

☐ 21003

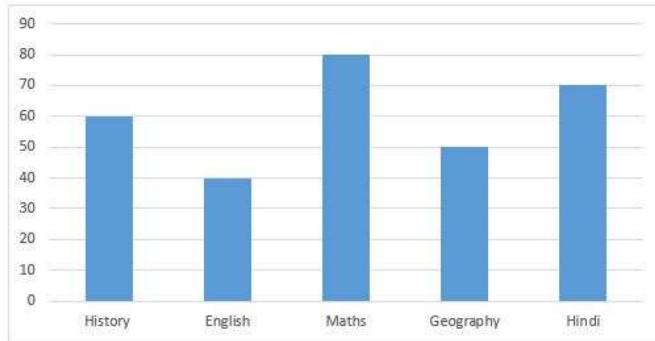
☐ 21004

Right Answer :

55

Right Option Id : 21002

Direction : The bar graph shows the marks obtained by a student in an examination out of 100 marks in each subject. Study the diagram and answer the question.



Sum of marks of all subject is

Answer :

(A) 300

(B) 400

(C) 250

(D) 270

Option Id

☐ 18001

☐ 18002

☐ 18003

☐ 18004

Right Answer :

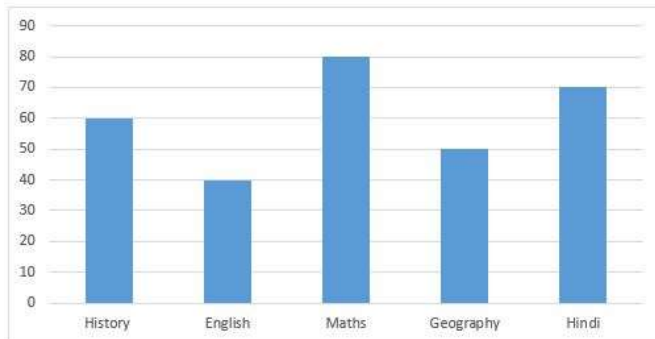
300

Right Option Id : 18001

Question 4

Question Id : 19

Direction : The bar graph shows the marks obtained by a student in an examination out of 100 marks in each subject. Study the diagram and answer the question.



The percentage of marks obtained is

Answer :

(A) 45

(B) 50

(C) 55

(D) 60

Option Id

☐ 19001

☐ 19002

☐ 19003

☐ 19004

Right Answer :

60

Right Option Id : 19004

Question 5

Question Id : 20

Prabhu can do a piece of work in 18 days and Ratan in 12 days. They begin together, but Prabhu goes away 2 days before the work is completed. The time in which the work was finished is

Answer :

(A) 6 days/दिन

(B) $8\frac{1}{3}$ days/ दिन

(C) $4\frac{3}{5}$ days/ दिन

Option Id

☐ 20001

☐ 20002

☐ 20003

(D) 8 days/दिन

☐ 20004

Right Answer :

8 days/दिन

Right Option Id : 20004

Question 6

A Car travels 50 metres in 5 second. The rate in kilometer per hours is

Answer :

(A) 42

(B) 36

(C) 30

(D) 24

Question Id : 16

Option Id

☐ 16001

☐ 16002

☐ 16003

☐ 16004

Right Answer :

36

Right Option Id : 16002

Question 7

A train covers a distance between stations A and B in 45 minutes. If the speed is reduced by 5km/h, it will cover the same distance in 48 minutes. The distance between two stations A and B in kms is:

Answer :

(A) 120 km

(B) 100 km

(C) 80 km

(D) 60 km

Question Id : 22

Option Id

☐ 22001

☐ 22002

☐ 22003

☐ 22004

Right Answer :

60 km

Right Option Id : 22004

Question 8

A Person Crosses a 600 m long street in 5 minutes. What is his speed in km per hour?

Answer :

(A) 3.6

(B) 7.2

(C) 8.4

(D) 10

Question Id : 23

Option Id

☐ 23001

☐ 23002

☐ 23003

☐ 23004

Right Answer :

7.2

Right Option Id : 23002

Question 9

If the number $91876*2$ is completely divisible by 8, then the smallest number in place of * will be:

Answer :

(A) 1

(B) 2

(C) 3

(D) 4

Question Id : 24

Option Id

☐ 24001

☐ 24002

☐ 24003

☐ 24004

Right Answer :

3

Right Option Id : 24003

Question 10

A Shopkeeper gives 12% additional Discount on the discounted price, after giving an initial discount of 20% on the labeled price of a radio. If the final sale price of the radio is Rs.704, then what is its labeled price?

Answer :

- (A) Rs. 844.80
(B) Rs. 9292.28
(C) Rs. 1000
(D) Rs. 1044.80

Question Id : 25

Option Id

- ☐ 25001
☐ 25002
☐ 25003
☐ 25004

Right Answer :

Rs. 1000

Right Option Id : 25003

Question 11

One side of a rectangular field is 15 m and one of its diagonals is 17 m. The area of the field is:

Answer :

- (A) 150 m²
(B) 140 m²
(C) 130 m²
(D) 120 m²

Question Id : 17

Option Id

- ☐ 17001
☐ 17002
☐ 17003
☐ 17004

Right Answer :

120 m²

Right Option Id : 17004

Question 12

The ratio of 15 paise to Rs.1.35 is :

Answer :

- (A) 01:15
(B) 03:27
(C) 135:3
(D) 100:150

Question Id : 15

Option Id

- ☐ 15001
☐ 15002
☐ 15003
☐ 15004

Right Answer :

03:27

Right Option Id : 15002

Question 13

The $39 - \{28 + (10 - 3 - 3)\}$ is equal to:

Answer :

- (A) 33
(B) 10
(C) 16
(D) 7

Question Id : 2

Option Id

- ☐ 2001
☐ 2002
☐ 2003
☐ 2004

Right Answer :

7

Right Option Id : 2004

Question 14

If $X:Y:Z = 7:6:8$, then $Y/Z : Z/X : X/Y$?

Answer :

- (A) $192 : 196 : 126$
- (B) $126 : 198 : 196$
- (C) $198 : 192 : 126$
- (D) $126 : 192 : 196$

Right Answer :

$126 : 192 : 196$

Question Id : 13

Option Id

- ☐ 13001
- ☐ 13002
- ☐ 13003
- ☐ 13004

Right Option Id : 13004

Question 15

Out of 50 children in a class, 20 are boys. Then the percentage of girls is?

Answer :

- (A) 30
- (B) 20
- (C) 40
- (D) 60

Right Answer :

60

Question Id : 12

Option Id

- ☐ 12001
- ☐ 12002
- ☐ 12003
- ☐ 12004

Right Option Id : 12004

Question 16

The interest on ₹ 5000 at the rate of 15% per annum for one month is:

Answer :

- (A) ₹ 750
- (B) ₹ 625
- (C) ₹ 62.50
- (D) ₹ 75

Right Answer :

₹ 62.50

Question Id : 11

Option Id

- ☐ 11001
- ☐ 11002
- ☐ 11003
- ☐ 11004

Right Option Id : 11003

Question 17

The ratio $3 : 8$ is equal to :

Answer :

- (A) 3.75%
- (B) 37.5%
- (C) 0.375%
- (D) 2.67

Right Answer :

37.5%

Question Id : 10

Option Id

- ☐ 10001
- ☐ 10002
- ☐ 10003
- ☐ 10004

Right Option Id : 10002

Question 18

Find the percentage gain if C.P. = Rs. 500 and S.P. = Rs. 565 .

Answer :

- (A) 13%

Question Id : 9

Option Id

- ☐ 9001

(B) 15%

☐ 9002

(C) 17%

☐ 9003

(D) 18%

☐ 9004

Right Answer :

13%

Right Option Id : 9001

Question 19

Question Id : 8

The average of $\frac{1}{5}$, $\frac{3}{10}$, $\frac{1}{2}$ is :

Answer :

Option Id

(A) 1

☐ 8001

(B) $\frac{1}{2}$

☐ 8002

(C) $\frac{1}{3}$

☐ 8003

(D) $\frac{3}{5}$

☐ 8004

Right Answer :

$\frac{1}{3}$

Right Option Id : 8003

Question 20

Question Id : 7

On sports day, Samyak jumped $4\frac{7}{12}$ feet and Mitansh jumped $3\frac{1}{6}$ feet.

How much Samyak jump more than Mitansha?

Answer :

Option Id

(A) 2 feet/फीट

☐ 7001

(B) $1\frac{5}{6}$ feet/फीट

☐ 7002

(C) $1\frac{5}{12}$ feet/ फीट

☐ 7003

(D) $\frac{5}{12}$ feet/फीट

☐ 7004

Right Answer :

$1\frac{5}{12}$ feet/ फीट

Right Option Id : 7003

Question 21

Question Id : 6

Compare: $\frac{5}{6} - \frac{1}{2} () \frac{3}{4} - \frac{2}{3}$

Answer :

Option Id

(A) <

☐ 6001

(B) >

☐ 6002

(C) =

☐ 6003

(D) None of these

☐ 6004

Right Answer :

>

Right Option Id : 6002

Question 22

Question Id : 5

The largest 4-digit number, using any one digit twice, from digits 5, 9, 2 and 6 is:

Answer :

(A) 9652

(B) 9562

(C) 9659

(D) 9965

Option Id

☐ 5001

☐ 5002

☐ 5003

☐ 5004

Right Answer :

9965

Right Option Id : 5004

Question 23

A number is divisible by 5 and 6. It may not be divisible by _____ .

Answer :

(A) 60

(B) 30

(C) 15

(D) 10

Question Id : 4

Option Id

☐ 4001

☐ 4002

☐ 4003

☐ 4004

Right Answer :

60

Right Option Id : 4001

Question 24

The average weight of 15 students is increased by 1.8 kg when one of the students who weighs 50 kg is replaced by a new student. Find the weight of the new student in kg.

Answer :

(A) 77

(B) 70

(C) 69

(D) 74

Question Id : 14

Option Id

☐ 14001

☐ 14002

☐ 14003

☐ 14004

Right Answer :

77

Right Option Id : 14001

Question 25

A girl buys a dress with marked price Rs.800/- at 30% discount. To make a profit of 30% the girl should sell the dress for ?

Answer :

(A) Rs.800/-

(B) Rs.560/-

(C) Rs.420/-

(D) Rs.500/-

Question Id : 3

Option Id

☐ 3001

☐ 3002

☐ 3003

☐ 3004

Marks Given to All Candidates

SECTION 2

Question 26

Who is known as the Iron man of India?

Answer :

Question Id : 47

Option Id

- (A) Govind Ballabh Pant
- (B) Jawaharlal Nehru
- (C) Subhas Chandra Bose
- (D) Sardar Vallabhbhai Patel

- ☐ 47001
- ☐ 47002
- ☐ 47003
- ☐ 47004

Right Answer :

Sardar Vallabhbhai Patel

Right Option Id : 47004

Question 27

The nucleus of an atom consists of which of the following?

Answer :

- (A) electrons and neutrons
- (B) electrons and protons
- (C) protons and neutrons
- (D) Only neutrons

Question Id : 46

Option Id

- ☐ 46001
- ☐ 46002
- ☐ 46003
- ☐ 46004

Right Answer :

protons and neutrons

Right Option Id : 46003

Question 28

Who is the first Indian woman to win two individual Olympic medals?

Answer :

- (A) Mary Kom
- (B) Chanu Saikhom Mirabai
- (C) Saina Nehwal
- (D) P.V. Sindhu

Question Id : 45

Option Id

- ☐ 45001
- ☐ 45002
- ☐ 45003
- ☐ 45004

Right Answer :

P.V. Sindhu

Right Option Id : 45004

Question 29

Which is the highest governing body of association football internationally?

Answer :

- (A) FCCI
- (B) FCC
- (C) FIFA
- (D) FACA

Question Id : 44

Option Id

- ☐ 44001
- ☐ 44002
- ☐ 44003
- ☐ 44004

Right Answer :

FIFA

Right Option Id : 44003

Question 30

On Independence Day, who hoists the flag at the Red Fort in New Delhi ?

Answer :

- (A) Chief Justice of India
- (B) Vice President
- (C) President

Question Id : 43

Option Id

- ☐ 43001
- ☐ 43002
- ☐ 43003

(D) Prime Minister

☐ 43004

Right Answer :

Prime Minister

Right Option Id : 43004

Question 31

Mehrangarh Fort is located in which of the following states?

Answer :

(A) Haryana

(B) Rajasthan

(C) Madhya Pradesh

(D) Uttar Pradesh

Question Id : 37

Option Id

☐ 37001

☐ 37002

☐ 37003

☐ 37004

Right Answer :

Rajasthan

Right Option Id : 37002

Question 32

Jawaharlal Nehru Port (JNPT) located in Maharashtra is also known as ____.

Answer :

(A) Nhava Sheva Port

(B) Shivaji Sheva Port

(C) Navi Mumbai Seaport

(D) Ennore Port

Question Id : 42

Option Id

☐ 42001

☐ 42002

☐ 42003

☐ 42004

Right Answer :

Nhava Sheva Port

Right Option Id : 42001

Question 33

What was the name of the space shuttle that made the first landing on the surface of the moon?

Answer :

(A) Apollo II

(B) Columbia II

(C) Challenger II

(D) Luna II

Question Id : 41

Option Id

☐ 41001

☐ 41002

☐ 41003

☐ 41004

Right Answer :

Luna II

Right Option Id : 41004

Question 34

Who was India's first female Chief Minister?

Answer :

(A) Sarojini Naidu

(B) Sucheta Kriplani

(C) Indira Gandhi

(D) Uma Bharti

Question Id : 40

Option Id

☐ 40001

☐ 40002

☐ 40003

☐ 40004

Right Answer :

Sucheta Kriplani

Right Option Id : 40002

Question 35

_____ got Noble prize for Economic Sciences in 2019.

Answer :

- (A) Amartya Sen
- (B) Kailash Satyarth
- (C) Satyendra Ghosh
- (D) Abhijit Banerjee

Question Id : 39

Option Id

- ☐ 39001
- ☐ 39002
- ☐ 39003
- ☐ 39004

Right Answer :

Abhijit Banerjee

Right Option Id : 39004

Question 36

Who is considered as the founding father of Indian space programme?

Answer :

- (A) Dr. C.V Raman
- (B) Dr.Vikram Sarabhai
- (C) Dr. Satyendranath bose
- (D) Dr. Homi Bhabha

Question Id : 38

Option Id

- ☐ 38001
- ☐ 38002
- ☐ 38003
- ☐ 38004

Right Answer :

Dr.Vikram Sarabhai

Right Option Id : 38002

Question 37

Orang National Park, is located in which of the following states of India?

Answer :

- (A) Andhra Pradesh
- (B) Karnataka
- (C) Assam
- (D) Uttarakhand

Question Id : 27

Option Id

- ☐ 27001
- ☐ 27002
- ☐ 27003
- ☐ 27004

Right Answer :

Assam

Right Option Id : 27003

Question 38

Which of the following dances is related to Rajasthan?

Answer :

- (A) Jatra
- (B) Ghoomar
- (C) Jhora
- (D) Jadur

Question Id : 36

Option Id

- ☐ 36001
- ☐ 36002
- ☐ 36003
- ☐ 36004

Right Answer :

Ghoomar

Right Option Id : 36002

Question 39

Question Id : 35

The Indian constitution does not allow for the impeachment of ____.

Answer :

- (A) Chief Justice of India
- (B) Vice President of India
- (C) President of India
- (D) Governor of any Indian State

Option Id

- ☐ 35001
- ☐ 35002
- ☐ 35003
- ☐ 35004

Right Answer :

Governor of any Indian State

Right Option Id : 35004

Question 40

Which among the following is called India's capital market watchdog?

Answer :

- (A) RBI (Reserve Bank of India)
- (B) SEBI (Securities and Exchange Board of India)
- (C) NABARD (National Bank for Agriculture and Rural Development)
- (D) SBI (State Bank of India)

Question Id : 34

Option Id

- ☐ 34001
- ☐ 34002
- ☐ 34003
- ☐ 34004

Right Answer :

SEBI (Securities and Exchange Board of India)

Right Option Id : 34002

Question 41

Who among the following was the founder of Chola Kingdom?

Answer :

- (A) Parantaka Chola I
- (B) Aditya I
- (C) Arinjaya Chola
- (D) Vijayalaya Chola

Question Id : 33

Option Id

- ☐ 33001
- ☐ 33002
- ☐ 33003
- ☐ 33004

Right Answer :

Vijayalaya Chola

Right Option Id : 33004

Question 42

Which among the following had adopted the National Flag of India on 22 July, 1947?

Answer :

- (A) The British East India Company
- (B) The National Integration Council
- (C) The Constituent Assembly of India
- (D) Indian National Army

Question Id : 32

Option Id

- ☐ 32001
- ☐ 32002
- ☐ 32003
- ☐ 32004

Right Answer :

The Constituent Assembly of India

Right Option Id : 32003

Question 43

The traditional "Mithila painting" is well-known all over the world with the name ____.

Answer :

- (A) Bhagalpuri Chintz
- (B) Tanjor Painting

Question Id : 31

Option Id

- ☐ 31001

(C) Jharnapatachitra

☐ 31002

(D) Madhubani Art

☐ 31003

☐ 31004

Right Answer :

Madhubani Art

Right Option Id : 31004

Question 44

Which amendment to the Indian Constitution introduced the Anti-Defection Law?

Question Id : 30

Answer :

Option Id

(A) 52ndAmendment

☐ 30001

(B) 72nd Amendment

☐ 30002

(C) 91st Amendment

☐ 30003

(D) 97th Amendment

☐ 30004

Right Answer :

52ndAmendment

Right Option Id : 30001

Question 45

The Loktak lake-the largest freshwater lake in Northeast India, is located in which state?

Question Id : 29

Answer :

Option Id

(A) Assam

☐ 29001

(B) Manipur

☐ 29002

(C) Tripura

☐ 29003

(D) Meghalaya

☐ 29004

Right Answer :

Manipur

Right Option Id : 29002

Question 46

Which portal is launched by Chief Justice of India (CJI) D.Y. Chandrachud that allows advocates, litigants, citizens to request QR code-based e-Passes to enter in the Supreme Court of India?

Question Id : 28

Answer :

Option Id

(A) SuAbhivadan

☐ 28001

(B) SuSwagatam

☐ 28002

(C) SuPranam

☐ 28003

(D) SuSatskar

☐ 28004

Right Answer :

SuSwagatam

Right Option Id : 28002

Question 47

Which among the following railway station from India gets UNESCO'S Asia Pacific Cultural Heritage award?

Question Id : 26

Answer :

Option Id

(A) Howrah Railway Station, West Bengal

☐ 26001

(B) Guntakal Railway Station, Andhra Pradesh

☐ 26002

(C) Kacheguda Railway Station, Telangana

☐ 26003

(D) Byculla Railway Station, Maharashtra

☐ 26004

Right Answer :

Byculla Railway Station, Maharashtra

Right Option Id : 26004

Question 48

India supports UN efforts to continue key Black Sea Grain deal terminated by which among the following countries?

Answer :

- (A) Russia
- (B) Germany
- (C) Australia
- (D) Scotland

Question Id : 49

Option Id

- ☐ 49001
- ☐ 49002
- ☐ 49003
- ☐ 49004

Right Answer :

Russia

Right Option Id : 49001

Question 49

Which of the following countries honoured Indian Army's contributions in the Second World War and has unveiled "V.C. Yeshwant Ghagde Sundial Memorial"?

Answer :

- (A) Egypt
- (B) Italy
- (C) United Kingdom
- (D) United States of America

Question Id : 48

Option Id

- ☐ 48001
- ☐ 48002
- ☐ 48003
- ☐ 48004

Right Answer :

Italy

Right Option Id : 48002

Question 50

The Government of India has set target to raise the share of natural gas in the energy mix to how many percentages by 2030?

Answer :

- (A) 25%
- (B) 6%
- (C) 20%
- (D) 15%

Question Id : 50

Option Id

- ☐ 50001
- ☐ 50002
- ☐ 50003
- ☐ 50004

Right Answer :

15%

Right Option Id : 50004

SECTION 3

Question 51

Find the missing number for below given series following the same logic.

1827, 1736, 1645, 1554, ?, 1372, 1281

Answer :

- (A) 1543
- (B) 1463
- (C) 1498
- (D) 1527

Question Id : 53

Option Id

- ☐ 53001
- ☐ 53002
- ☐ 53003
- ☐ 53004

Right Answer :
1463

Right Option Id : 53002

Question 52

Pointing to Falguni, Hardik said, "The son of her only brother is the brother of my wife". How is Falguni related to Hardik?

Answer :

- (A) Sister of father-in-law
- (B) Grandmother
- (C) Maternal aunt
- (D) Niece

Question Id : 71

Option Id

- ☐ 71001
- ☐ 71002
- ☐ 71003
- ☐ 71004

Right Answer :
Sister of father-in-law

Right Option Id : 71001

Question 53

Choose the correct option.

$1^A BCDE$, $12^B CDE$, _____, $1234^D E$, 12345^E

Answer :

- (A) $1^C BCDE$
- (B) $123^C DE$
- (C) $1234^C E$
- (D) 12345^C

Question Id : 68

Option Id

- ☐ 68001
- ☐ 68002
- ☐ 68003
- ☐ 68004

Right Answer :
 $123^C DE$

Right Option Id : 68002

Question 54

If E denotes ' \times ', F denotes ' \div ', G denotes '+' and H denotes '-', then $8 \text{ G } 36 \text{ F } 6 \text{ H } 6 \text{ E } 3 = ?$

Answer :

- (A) -2
- (B) -4
- (C) 13
- (D) 5

Question Id : 69

Option Id

- ☐ 69001
- ☐ 69002
- ☐ 69003
- ☐ 69004

Right Answer :
-4

Right Option Id : 69002

Question 55

Select the option which is different from the other three options.

Answer :

- (A) DEB
- (B) RTP
- (C) HIF
- (D) NOL

Question Id : 70

Option Id

- ☐ 70001
- ☐ 70002
- ☐ 70003
- ☐ 70004

Right Answer :
RTP

Right Option Id : 70002

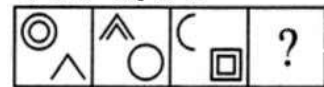
Question 56

Question Id : 66

Select a suitable figure from the Answer Figures that would replace the question mark (?).

Problem Figures:

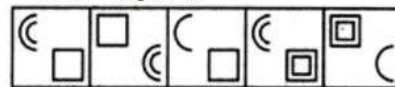
समस्या आकृतियाँ



(A) (B) (C) (D)

Answer Figures:

उत्तर आकृतियाँ



(1) (2) (3) (4) (5)

Answer :

(A) (1)

(B) (2)

(C) (3)

(D) (4)

Option Id

☐ 66001☐ 66002☐ 66003☐ 66004**Right Answer :**

(2)

Right Option Id : 66002**Question 57**

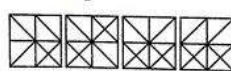
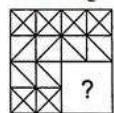
Question Id : 72

Identify the missing part of the question figure and select it from given answer figures.

Question Figure**Answer Figures**

प्रश्न आकृति

उत्तर आकृतियाँ



(a) (b) (c) (d)

(X)

Answer :

(A) (a)

(B) (b)

(C) (c)

(D) (d)

Option Id

☐ 72001☐ 72002☐ 72003☐ 72004**Right Answer :**

(d)

Right Option Id : 72004**Question 58**

Question Id : 73

Arrange the given word in the meaning full sequence.

1. Run out 2. Delivery 3. Decision 4. Shot 5. Third Umpire

Answer :

(A) 2 3 4 1 5

(B) 2 5 4 1 3

(C) 2 4 1 5 3

(D) 3 4 5 1 2

Option Id

☐ 73001☐ 73002☐ 73003☐ 73004**Right Answer :**

2 4 1 5 3

Right Option Id : 73003**Question 59**

Question Id : 74

Which of the following words will come at second position if all the words are arranged alphabetically?

1. Arrangement 2. Arrogant 3. Arrest 4. Arrival 5. Arrears

Answer :

Option Id

- (A) Arrest
- (B) Arrival
- (C) Arrears
- (D) Arrogant

- ☐ 74001
- ☐ 74002
- ☐ 74003
- ☐ 74004

Right Answer :

Arrears

Right Option Id : 74003

Question 60

Direction: To the following question four probable answers have been given. Select the most appropriate alternative as the answer.
While passing through a railway line, you notice that two trains from the opposite direction are tuning on the same lines, you would-

Answer :

- (A) Go your way without taking any of the accident likely to happen
- (B) Rush towards either of the running trains and try to intimate the engine staff about the probable accident
- (C) Rush to the nearest station and inform the railway authorities about all that you had noticed
- (D) Wait and see till the trains pass on

Option Id

- ☐ 75001
- ☐ 75002
- ☐ 75003
- ☐ 75004

Right Answer :

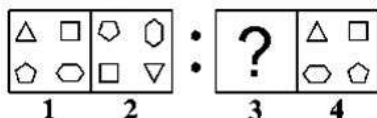
Rush towards either of the running trains and try to intimate the engine staff about the probable accident

Right Option Id : 75002

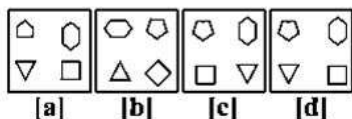
Question 61

The second figure in the unit of the problem figures bears a certain relationship to the first figure. Similarly, one of the figure in the answer figures bears the same relationship to the figure in the second unit the problem figures. You have to select that figure from the set of answer figures which would come in the place of question mark (?)

Problem Figures समस्या आकृतियाँ



Answer Figures उत्तर आकृतियाँ



Answer :

- (A) [a]
- (B) [b]
- (C) [c]
- (D) [d]

Option Id

- ☐ 67001
- ☐ 67002
- ☐ 67003
- ☐ 67004

Right Answer :

[d]

Right Option Id : 67004

Question 62

Of the six members of a panel sitting in a row, A is to the right of C, but left of B. E is sitting left of C and right of D, D is sitting to the right of F. Find the members sitting at the two ends of the row.

Answer :

- (A) D, F
- (B) D, B
- (C) A, F

Option Id

- ☐ 65001
- ☐ 65002
- ☐ 65003

(D) F, B

☐ 65004

Right Answer :

F, B

Right Option Id : 65004

Question 63

Four pairs of letter-cluster have been given out of which three are alike in some manner, while one is different. Choose the odd one.

Answer :

(A) NVH-KUK

(B) CWX-AVZ

(C) REA-ODD

(D) TXB-QWE

Question Id : 52

Option Id

☐ 52001

☐ 52002

☐ 52003

☐ 52004

Right Answer :

CWX-AVZ

Right Option Id : 52002

Question 64

On 5th December 1993, Nirmala and Raju celebrated their marriage anniversary on Sunday. What will be the day on their marriage anniversary in 1997?

Answer :

(A) Wednesday

(B) Thursday

(C) Friday

(D) Tuesday

Question Id : 63

Option Id

☐ 63001

☐ 63002

☐ 63003

☐ 63004

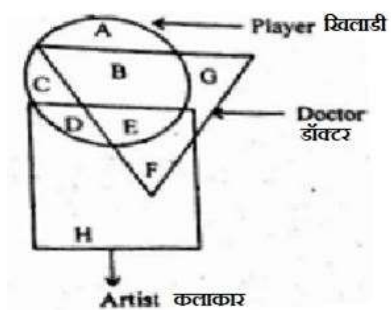
Right Answer :

Friday

Right Option Id : 63003

Question 65

In the following Venn diagram identify the letter which denotes players who are also doctors but not artist.



Answer :

(A) B + E

(B) E

(C) B

(D) A

Question Id : 62

Option Id

☐ 62001

☐ 62002

☐ 62003

☐ 62004

Right Answer :

B

Right Option Id : 62003

Question 66

Choose the odd one from the given chooses:

Question Id : 61

Answer :

- (A) Screwdriver : Screw
(B) Hammer : Nail
(C) Pen : Pencil
(D) Shovel : Mud

Option Id

- ☐ 61001
☐ 61002
☐ 61003
☐ 61004

Right Answer :

Pen : Pencil

Right Option Id : 61003

Question 67

Question Id : 60

Select a figure from amongst the Answer Figures which will continue the same series as established by the five Problem Figures.

Problem Figures: समस्या आकृतियाँ



(A) (B) (C) (D) (E)

Answer Figures: उत्तर आकृतियाँ



(1) (2) (3) (4) (5)

Answer :

- (A) (1)
(B) (2)
(C) (3)
(D) (4)

Option Id

- ☐ 60001
☐ 60002
☐ 60003
☐ 60004

Right Answer :

(1)

Right Option Id : 60001

Question 68

Question Id : 64

Choose the right water image of the given word.

NUCLEAR

(1) RAEГCUI

(2) IUCTEAB

(3) IUCTEAB

(4) IUCTEAB

Answer :

- (A) 1
(B) 2
(C) 3
(D) 4

Option Id

- ☐ 64001
☐ 64002
☐ 64003
☐ 64004

Right Answer :

4

Right Option Id : 64004

Question 69

Question Id : 59

Find which one word cannot be made from the letters of the given word.

JACKFRUIT

Answer :

- (A) uratic
(B) craft
(C) trait

Option Id

- ☐ 59001
☐ 59002

(D) trick

☐ 59003

☐ 59004

Right Answer :
trait

Right Option Id : 59003

Question 70

Question Id : 58

Here are some words translated from an artificial language.

aptuose means first base

eptaose means second base

lartabuk means ballpark

Which word could mean "baseball"?

Answer :

Option Id

(A) buklarta

☐ 58001

(B) osepta

☐ 58002

(C) bukose

☐ 58003

(D) oselarta

☐ 58004

Right Answer :
oselarta

Right Option Id : 58004

Question 71

Question Id : 57

If you are participating in an inter-school football match, then you should :

Answer :

Option Id

(A) Hurt the opposing team members

☐ 57001

(B) Start crying on losing the match

☐ 57002

(C) Accept victory or defeat like a true sportsman

☐ 57003

(D) Use unfair means to win.

☐ 57004

Right Answer :
Accept victory or defeat like a true sportsman

Right Option Id : 57003

Question 72

Question Id : 56

Select the related number from the given alternatives.

343 : 1002 :: 512 : (?)

Answer :

Option Id

(A) 1024

☐ 56001

(B) 1509

☐ 56002

(C) 1536

☐ 56003

(D) 1016

☐ 56004

Right Answer :
1509

Right Option Id : 56002

Question 73

Question Id : 55

Seema, an accomplished pastry chef who is well known for her artistic and exquisite wedding cakes, opened a bakery one year ago and is surprised that business has been so slow. A consultant she hired to conduct market research has reported that the local population doesn't think of her shop as one they would visit on a daily basis but rather a place they'd visit if they were celebrating a special occasion. Which of the following strategies should Seema employ to increase her daily business?

Answer :

Option Id

(A) exhibiting at the next Bridal Expo and having pieces of one of her wedding cakes available for testing

☐ 55001

(B) making coupons available that entitle the coupon holder to receive a 25% discount on wedding, anniversary, or birthday cakes

☐ 55002

(C) placing a series of ads in the local newspaper that advertise the wide array of breads

☐ 55003

(D) moving the bakery to the other side of town

☐ 55004

Right Answer :

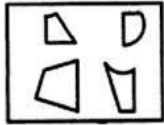
placing a series of ads in the local newspaper that advertise the wide array of breads

Right Option Id : 55003

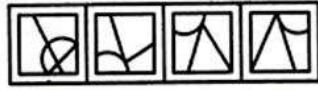
Question 74

Question Id : 54

Find out which of the figures (1), (2), (3) and (4) can be formed from the pieces given in figure (X).



(X)



(1)

(2)

(3)

(4)

Answer :

(A) (1)

Option Id

☐ 54001

(B) (2)

☐ 54002

(C) (3)

☐ 54003

(D) (4)

☐ 54004

Right Answer :

(2)

Right Option Id : 54002

Question 75

Question Id : 51

Select the alternative which represents three out of the five alternative figures which when fitted into each other would form a complete square.



(1)



(2)



(3)



(4)



(5)

Answer :

(A) 1,2,3

Option Id

☐ 51001

(B) 2,3,4

☐ 51002

(C) 2,4,5

☐ 51003

(D) 1,2,5

☐ 51004

Right Answer :

2,3,4

Right Option Id : 51002

SECTION 4

Question 76

Question Id : 99

Choose the correct synonym: "synonymous"

Answer :

(A) clever

Option Id

☐ 99001

(B) goal

☐ 99002

(C) identical

☐ 99003

(D) famous

☐ 99004

Right Answer :
identical

Right Option Id : 99003

Question 77

Choose the correct synonym of: "accuse"

Answer :

- (A) emotional
- (B) bold
- (C) blame
- (D) shorten

Question Id : 98

Option Id

- ☐ 98001
- ☐ 98002
- ☐ 98003
- ☐ 98004

Right Answer :
blame

Right Option Id : 98003

Question 78

Change the voice:

"Every passing vehicle was being thoroughly checked by the guards."

Answer :

- (A) The guards were thoroughly checking every passing vehicle.
- (B) The guards have thoroughly checked every passing vehicle.
- (C) Every passing vehicle were thoroughly checking the guards.
- (D) The guards have been thoroughly checking every passing vehicle.

Question Id : 97

Option Id

- ☐ 97001
- ☐ 97002
- ☐ 97003
- ☐ 97004

Right Answer :
The guards were thoroughly checking every passing vehicle.

Right Option Id : 97001

Question 79

Which is the suffix appropriate for 'relative'?

Answer :

- (A) ness
- (B) tion
- (C) ance
- (D) ity

Question Id : 96

Option Id

- ☐ 96001
- ☐ 96002
- ☐ 96003
- ☐ 96004

Right Answer :
ity

Right Option Id : 96004

Question 80

Choose the correct antonym: "grief"

Answer :

- (A) menace
- (B) joy
- (C) inspiration
- (D) pardon

Question Id : 95

Option Id

- ☐ 95001
- ☐ 95002
- ☐ 95003
- ☐ 95004

Right Answer :
joy

Right Option Id : 95002

Question 81

Choose the correct antonym: "gentle"

Answer :

- (A) dull
- (B) upset
- (C) noble
- (D) fierce

Right Answer :
fierce

Question Id : 94

Option Id

- ☐ 94001
- ☐ 94002
- ☐ 94003
- ☐ 94004

Right Option Id : 94004

Question 82

Choose the correct verb:

"I will be ____ to Switzerland next year."

Answer :

- (A) flying
- (B) fly
- (C) flies
- (D) None of these

Right Answer :
flying

Question Id : 93

Option Id

- ☐ 93001
- ☐ 93002
- ☐ 93003
- ☐ 93004

Right Option Id : 93001

Question 83

Choose the correct verb:

"Mahesh ____ the ball towards the keeper."

Answer :

- (A) throw
- (B) threw
- (C) throwing
- (D) throwed

Right Answer :
threw

Question Id : 92

Option Id

- ☐ 92001
- ☐ 92002
- ☐ 92003
- ☐ 92004

Right Option Id : 92002

Question 84

Choose the correct verb:

"Parul ____ her lunch in the library yesterday."

Answer :

- (A) eat
- (B) eats
- (C) eating
- (D) ate

Right Answer :
ate

Question Id : 91

Option Id

- ☐ 91001
- ☐ 91002
- ☐ 91003
- ☐ 91004

Right Option Id : 91004

Question 85

Choose the correct article:

Can you speak ____ French?

Question Id : 90

Answer :

(A) a

(B) an

(C) the

(D) No article

Option Id

☐ 90001

☐ 90002

☐ 90003

☐ 90004

Right Answer :

No article

Right Option Id : 90004

Question 86

Fill in the blank with correct article:
_____ back of his cupboard was clean.

Answer :

(A) A

(B) An

(C) The

(D) None of these

Question Id : 89

Option Id

☐ 89001

☐ 89002

☐ 89003

☐ 89004

Right Answer :

The

Right Option Id : 89003

Question 87

Choose the correct sentence in punctuation.

Answer :

(A) Why do fairy tales always end with the sentence "And they lived happily ever after."?

(B) Why, do fairy tales always end with the sentence, "And they lived happily ever after."?

(C) Why do fairy tales always end with the sentence, "And they lived happily ever after."?

(D) Why do fairy tales : always end with the sentence "And they lived happily, ever after."?

Question Id : 76

Option Id

☐ 76001

☐ 76002

☐ 76003

☐ 76004

Right Answer :

Why do fairy tales always end with the sentence, "And they lived happily ever after."?

Right Option Id : 76003

Question 88

Select the option to make the sentence correct:
"The woman works here is Japan woman."

Answer :

(A) The woman who works here is Japan.

(B) The woman who works here is from Japan.

(C) The woman works Japan.

(D) The woman works is Japan.

Question Id : 87

Option Id

☐ 87001

☐ 87002

☐ 87003

☐ 87004

Right Answer :

The woman who works here is from Japan.

Right Option Id : 87002

Question 89

Choose the correct preposition:
"His house is adjacent ____ mine."

Answer :

Question Id : 86

Option Id

(A) on

☐ 86001

(B) before

☐ 86002

(C) after

☐ 86003

(D) to

☐ 86004

Right Answer :

to

Right Option Id : 86004

Question 90

Choose the correct preposition:

"He is proud ____ his wealth."

Answer :

(A) before

Option Id

☐ 85001

(B) after

☐ 85002

(C) of

☐ 85003

(D) between

☐ 85004

Right Answer :

of

Right Option Id : 85003

Question 91

Choose the correct conjunction:

"He is not so intelligent ____ he appears to be."

Answer :

(A) as

Option Id

☐ 84001

(B) so

☐ 84002

(C) as soon as

☐ 84003

(D) for

☐ 84004

Right Answer :

as

Right Option Id : 84001

Question 92

Choose the correct conjunction:

"Go at once, ____ you will miss the bus."

Answer :

(A) or

Option Id

☐ 83001

(B) too

☐ 83002

(C) whenever

☐ 83003

(D) when

☐ 83004

Right Answer :

or

Right Option Id : 83001

Question 93

Change the voice:

"Rohan will repair the old machine."

Answer :

(A) The old machine will be repaired by Rohan.

Question Id : 82

Option Id

(B) The old machine repaired by Rohan.

☐ 82001

(C) The old machine repair by Rohan.

☐ 82002

(D) The old machine repairs by Rohan.

☐ 82003

☐ 82004

Right Answer :

The old machine will be repaired by Rohan.

Right Option Id : 82001

Question 94

Which part of the sentence is incorrect?:

"The boss asked the employee to preparing the file."

Answer :

(A) The boss asked

Option Id

☐ 81001

(B) the employee to

☐ 81002

(C) preparing the file.

☐ 81003

(D) No error

☐ 81004

Right Answer :

preparing the file.

Right Option Id : 81003

Question 95

Choose the correct reported speech:

"Vinod said, "The Karnavati Express has arrived."

Answer :

(A) Vinod said that the Karnavati Express has arrived.

Option Id

☐ 80001

(B) Vinod said that the Karnavati Express arrived.

☐ 80002

(C) Vinod said that the Karnavati Express had arrived.

☐ 80003

(D) Vinod said that the Karnavati Express has arriving.

☐ 80004

Right Answer :

Vinod said that the Karnavati Express had arrived.

Right Option Id : 80003

Question 96

Give the meaning of underlined idiom :

"Your project report is up to the mark."

Answer :

(A) to be honest

Option Id

☐ 79001

(B) to be good enough

☐ 79002

(C) to be last

☐ 79003

(D) to be funny

☐ 79004

Right Answer :

to be good enough

Right Option Id : 79002

Question 97

Give one word substitute of: "break an agreement, law or promise"

Answer :

(A) violate

Option Id

☐ 78001

(B) mature

Question Id : 78

(C) insignia

☐ 78002

(D) preface

☐ 78003

☐ 78004

Right Answer :

violate

Right Option Id : 78001

Question 98

Find out the incorrect spelling from the followings.

Answer :

(A) Conquer

Option Id

☐ 77001

(B) Passenger

☐ 77002

(C) Variety

☐ 77003

(D) Retalitate

☐ 77004

Right Answer :

Retalitate

Right Option Id : 77004

Question 99

Choose the most appropriate reported form of speech.:

Sheela said to me, "I saw you yesterday."

Answer :

(A) Sheela told me that she had seen me the previous day.

Option Id

☐ 88001

(B) Sheela told me that she has see you the previous day.

☐ 88002

(C) Sheela told me that she was seeing you the previous day.

☐ 88003

(D) Sheela told me that she were seeing me the previous day.

☐ 88004

Right Answer :

Sheela told me that she had seen me the previous day.

Right Option Id : 88001

Question 100

Identify the meaning of the idiom: At arm's length

Answer :

(A) very far

Option Id

☐ 100001

(B) At a distance

☐ 100002

(C) Insult

☐ 100003

(D) Very near

☐ 100004

Right Answer :

At a distance

Right Option Id : 100002