

QUESTION PAPER
Driver Ordinary grade [SHIFT - 1]

Exam Date : 06/09/2023

Time : 03:30 PM - 05:30 PM

SECTION 1

Question 1

What does a red traffic signal signify?

Answer :

- (A) Vehicle should be slowed down
- (B) Drive with caution
- (C) Stop the vehicle completely
- (D) Do not stop, drive fast

Right Answer :

Stop the vehicle completely

Question Id : 1

Option Id

- ☐ 1001
- ☐ 1002
- ☐ 1003
- ☐ 1004

Right Option Id : 1003

Question 2

Where from the following parking of a vehicle is not prohibited?

Answer :

- (A) On the wrong side of the road
- (B) Footpath
- (C) In the middle of the road
- (D) On private properties with the owner's consent

Right Answer :

On private properties with the owner's consent

Question Id : 17

Option Id

- ☐ 17001
- ☐ 17002
- ☐ 17003
- ☐ 17004

Right Option Id : 17004

Question 3

What does a yellow light during traffic signify?

Answer :

- (A) Stop the vehicle completely
- (B) Slow down the vehicle
- (C) Reduce your vehicle's speed and drive cautiously
- (D) Park your vehicle in the side

Right Answer :

Reduce your vehicle's speed and drive cautiously

Question Id : 15

Option Id

- ☐ 15001
- ☐ 15002
- ☐ 15003
- ☐ 15004

Right Option Id : 15003

Question 4

What is the legal age to ride a motorcycle without a gear?

Answer :

- (A) 20 years
- (B) 24 years
- (C) 16 years
- (D) 18 years

Question Id : 16

Option Id

- ☐ 16001
- ☐ 16002
- ☐ 16003
- ☐ 16004

Right Answer :

16 years

Right Option Id : 16003

Question 5

Overtaking is to be done from which side?

Answer :

- (A) The left side of the vehicle
- (B) The right side of the vehicle
- (C) Any convenient side
- (D) From no side

Right Answer :

The right side of the vehicle

Question Id : 13

Option Id

- ☐ 13001
- ☐ 13002
- ☐ 13003
- ☐ 13004

Right Option Id : 13002

Question 6

What is the full form of PUCC?

Answer :

- (A) Pollution Under Control Certificate
- (B) Pollution Uncontrolled Certificate
- (C) Portal Utility Control Certificate
- (D) Pollution Uncontrolled Cancellation Certificate

Right Answer :

Pollution Under Control Certificate

Question Id : 18

Option Id

- ☐ 18001
- ☐ 18002
- ☐ 18003
- ☐ 18004

Right Option Id : 18001

Question 7

What is the shape of "No Entry" sign?

Answer :

- (A) Triangle
- (B) Circle
- (C) Pentagon
- (D) Hexagon

Right Answer :

Circle

Question Id : 19

Option Id

- ☐ 19001
- ☐ 19002
- ☐ 19003
- ☐ 19004

Right Option Id : 19002

Question 8

In what colour, the letters of number plate of private vehicle are written?

Answer :

- (A) White
- (B) Black
- (C) Green
- (D) Blue

Right Answer :

Black

Question Id : 20

Option Id

- ☐ 20001
- ☐ 20002
- ☐ 20003
- ☐ 20004

Right Option Id : 20002

Question 9

Question Id : 14

Which type of vehicle maintenance is most effective?

Answer :

(A) Shutdown

(B) Corrective

(C) Breakdown

(D) Preventive

Option Id

☐ 14001

☐ 14002

☐ 14003

☐ 14004

Right Answer :

Preventive

Right Option Id : 14004

Question 10

Why is CNG (Compressed Natural Gas) preferred over petrol?

Answer :

(A) Burns more efficiently

(B) It is expensive

(C) Burns less efficiently

(D) leaves much more residue

Question Id : 12

Option Id

☐ 12001

☐ 12002

☐ 12003

☐ 12004

Right Answer :

Burns more efficiently

Right Option Id : 12001

Question 11

When are the hazard lights (both indicators blinking) to be used?

Answer :

(A) Stopping the vehicle

(B) Parking the vehicle

(C) When the vehicle has a breakdown

(D) For going straight at an intersection

Question Id : 2

Option Id

☐ 2001

☐ 2002

☐ 2003

☐ 2004

Right Answer :

When the vehicle has a breakdown

Right Option Id : 2003

Question 12

How can you distinguish a transport vehicle from other vehicles?

Answer :

(A) By the tyre size

(B) By the colour of the vehicle

(C) By looking at the number plate of the vehicle

(D) A truck is a transport vehicle

Question Id : 10

Option Id

☐ 10001

☐ 10002

☐ 10003

☐ 10004

Right Answer :

By looking at the number plate of the vehicle

Right Option Id : 10003

Question 13

The validity of a fitness certificate for commercial vehicle stands at how many years for vehicles up to 8 years old?

Answer :

(A) 1 (One) year

(B) 2 (Two) years

Question Id : 9

Option Id

☐ 9001

(C) 3 (Three) years

☐ 9002

(D) 5 (Five) Years

☐ 9003

☐ 9004

Right Answer :

1 (One) year

Right Option Id : 9001

Question 14

Which coloured number plate is there for Electric vehicles?

Answer :

(A) White

(B) Green

(C) Black

(D) Yellow

Question Id : 8

Option Id

☐ 8001

☐ 8002

☐ 8003

☐ 8004

Right Answer :

Green

Right Option Id : 8002

Question 15

The speed limit for a goods transport vehicle on a highway is:

Answer :

(A) 65 kmph

(B) 80 kmph

(C) 40 kmph

(D) 60 kmph

Question Id : 11

Option Id

☐ 11001

☐ 11002

☐ 11003

☐ 11004

Right Answer :

80 kmph

Right Option Id : 11002

Question 16

Zebra lines are meant for:

Answer :

(A) Pedestrians crossing

(B) Zebra

(C) For stopping the vehicles

(D) For helping a handicap person

Question Id : 7

Option Id

☐ 7001

☐ 7002

☐ 7003

☐ 7004

Right Answer :

Pedestrians crossing

Right Option Id : 7001

Question 17

Free passage should be given to _____.

Answer :

(A) Army vehicles

(B) VIP vehicles

(C) Ambulance and fire service vehicles

(D) Express buses

Question Id : 6

Option Id

☐ 6001

☐ 6002

☐ 6003

☐ 6004

Right Answer :

Ambulance and fire service vehicles

Right Option Id : 6003

Question 18

What does vehicle maintenance consist of?

Answer :

- (A) An inspection of the braking system only.
- (B) Replacement of oil, air, fuel, filters only.
- (C) Series of checks and replacement of serviceable items
- (D) A visual check of all vehicle systems.

Question Id : 5

Option Id

- ☐ 5001
- ☐ 5002
- ☐ 5003
- ☐ 5004

Right Answer :

Series of checks and replacement of serviceable items

Right Option Id : 5003

Question 19

Which among the following is not a required documents while driving a car in India?

Answer :

- (A) Registration Certificate (RC)
- (B) Car Insurance Policy
- (C) Driving License
- (D) Aadhar Card

Question Id : 4

Option Id

- ☐ 4001
- ☐ 4002
- ☐ 4003
- ☐ 4004

Right Answer :

Aadhar Card

Right Option Id : 4004

Question 20

If you wish to take a "U" turn at traffic light, you should _____ .

Answer :

- (A) drive to another intersection that has no traffic light
- (B) wait till the light turns green before taking a "U" turn
- (C) make a "U" turn if there is less traffic
- (D) give right indicator and turn

Question Id : 3

Option Id

- ☐ 3001
- ☐ 3002
- ☐ 3003
- ☐ 3004

Right Answer :

wait till the light turns green before taking a "U" turn

Right Option Id : 3002

SECTION 2

Question 21

Manas river is a tributary of which of the following rivers?

Answer :

- (A) Narmada
- (B) Ganga
- (C) Indus
- (D) Brahmaputra

Question Id : 37

Option Id

- ☐ 37001
- ☐ 37002
- ☐ 37003
- ☐ 37004

Right Answer :

Brahmaputra

Right Option Id : 37004

Question 22

What shall be the ratio of the length to the height (width) of the Indian National Flag?

Answer :

- (A) 3:2
(B) 2:3
(C) 3:4
(D) 4:3

Right Answer :
3:2

Question Id : 35

Option Id

- ☐ 35001
☐ 35002
☐ 35003
☐ 35004

Right Option Id : 35001

Question 23

Which one among the following kings defeated Mohammed Ghori in the First Battle of Tarain?

Answer :

- (A) Pulakeshin II
(B) Maharana Pratap
(C) Mahendravarman I
(D) Prithviraj Chauhan

Right Answer :
Prithviraj Chauhan

Question Id : 36

Option Id

- ☐ 36001
☐ 36002
☐ 36003
☐ 36004

Right Option Id : 36004

Question 24

After which of the following events Vallabhbhai Patel got the title of "Sardar"?

Answer :

- (A) Champaran Satyagraha
(B) Dandi March
(C) Bardoli Satyagraha
(D) Kheda Satyagraha

Right Answer :
Bardoli Satyagraha

Question Id : 31

Option Id

- ☐ 31001
☐ 31002
☐ 31003
☐ 31004

Right Option Id : 31003

Question 25

Which Indian got Nobel prize for economics in 1998?

Answer :

- (A) Abhijit Banerjee
(B) Mother Teresa
(C) C V Raman
(D) Amartya Sen

Right Answer :
Amartya Sen

Question Id : 33

Option Id

- ☐ 33001
☐ 33002
☐ 33003
☐ 33004

Right Option Id : 33004

Question 26

What is the minimum age to be qualified for Rajya Sabha membership?

Question Id : 38

Answer :

(A) 18 Years

(B) 21 Years

(C) 24 Years

(D) 30 Years

Option Id

☐ 38001

☐ 38002

☐ 38003

☐ 38004

Right Answer :

30 Years

Right Option Id : 38004

Question 27

Pattachitra is a popular art form of which state?

Answer :

(A) Andhra Pradesh

(B) Maharashtra

(C) Odisha

(D) Bihar

Question Id : 39

Option Id

☐ 39001

☐ 39002

☐ 39003

☐ 39004

Right Answer :

Odisha

Right Option Id : 39003

Question 28

Palk Strait, inlet of the Bay of Bengal separates countries_____.

Answer :

(A) India and Bangladesh

(B) India and Sri Lanka

(C) Sri Lanka and Maldives

(D) India and Maldives

Question Id : 40

Option Id

☐ 40001

☐ 40002

☐ 40003

☐ 40004

Right Answer :

India and Sri Lanka

Right Option Id : 40002

Question 29

The internal secretion of ____ helps in digestion.

Answer :

(A) Hydrochloric acid

(B) Sulphuric acid

(C) Acetic acid

(D) Citric acid

Question Id : 34

Option Id

☐ 34001

☐ 34002

☐ 34003

☐ 34004

Right Answer :

Hydrochloric acid

Right Option Id : 34001

Question 30

The coil in a heater is made of?

Answer :

(A) Tungsten

(B) Nichrome

Question Id : 32

Option Id

☐ 32001

☐ 32002

(C) Iron

☐ 32003

(D) Copper

☐ 32004

Right Answer :
Nichrome

Right Option Id : 32002

Question 31

Question Id : 21

The word "The Sea of Tranquility" is associated with which of the following celestial bodies?

Answer :

Option Id

(A) Moon

☐ 21001

(B) Sun

☐ 21002

(C) Mars

☐ 21003

(D) Jupiter

☐ 21004

Right Answer :
Moon

Right Option Id : 21001

Question 32

Question Id : 30

The speed of Modem is calculated by which among the following rate?

Answer :

Option Id

(A) GPS

☐ 30001

(B) CPS

☐ 30002

(C) FPS

☐ 30003

(D) BPS

☐ 30004

Right Answer :
BPS

Right Option Id : 30004

Question 33

Question Id : 29

Hola Mohalla' a festival, that is all about gallant, warriors, bravery, victory, glory and fearlessness, celebrated in which Indian state?

Answer :

Option Id

(A) Rajasthan

☐ 29001

(B) Punjab

☐ 29002

(C) Bihar

☐ 29003

(D) Madhya Pradesh

☐ 29004

Right Answer :
Punjab

Right Option Id : 29002

Question 34

Question Id : 28

India's International Cherry Blossom Festival is usually celebrated in which state?

Answer :

Option Id

(A) Arunachal Pradesh

☐ 28001

(B) Sikkim

☐ 28002

(C) Meghalaya

☐ 28003

(D) Himachal Pradesh

☐ 28004

Right Answer :

Meghalaya

Right Option Id : 28003

Question 35

Which of the following is the first and largest depository presently operational in India?

Answer :

(A) NSDL

(B) CDSL

(C) BSI

(D) UBI

Question Id : 27

Option Id

☐ 27001

☐ 27002

☐ 27003

☐ 27004

Right Answer :

NSDL

Right Option Id : 27001

Question 36

In which schedule of the Indian Constitution powers of panchayats are stated?

Answer :

(A) 11th schedule

(B) 10th schedule

(C) 9th schedule

(D) 8th schedule

Question Id : 26

Option Id

☐ 26001

☐ 26002

☐ 26003

☐ 26004

Right Answer :

11th schedule

Right Option Id : 26001

Question 37

Recently, National Commission for Protection of Child Rights (NCPCR) has developed which among the following applications for Seamless Inspection for real time monitoring of the Child Care Institutions?

Answer :

(A) MAA

(B) MASI

(C) MCTS

(D) MCH

Question Id : 25

Option Id

☐ 25001

☐ 25002

☐ 25003

☐ 25004

Right Answer :

MASI

Right Option Id : 25002

Question 38

Under which programme the Ministry of Ports, Shipping and Waterways is developing a National Maritime Heritage Complex with a world-class facility at Lothal, Gujarat?

Answer :

(A) SagarMala

(B) SagarMoti

(C) SagarShreshtha

(D) SagarSahakar

Question Id : 24

Option Id

☐ 24001

☐ 24002

☐ 24003

☐ 24004

Right Answer :

SagarMala

Right Option Id : 24001

Question 39**Question Id : 23**

Recently, the leaders of India and which among the following countries committed to enhance cooperation on climate ambition, decarbonization, clean energy and work together to have meaningful outcomes from the 28th Session of the UNFCCC Conference of Parties?

Answer :

Option Id

(A) Singapore

☐ 23001

(B) Nepal

☐ 23002

(C) United Arab Emirates (UAE)

☐ 23003

(D) Japan

☐ 23004

Right Answer :

Right Option Id : 23003

United Arab Emirates (UAE)

Question 40**Question Id : 22**

A target of a billion euros was set for bilateral trade between the two countries till the end of this decade between India and which of the following countries recently?

Answer :

Option Id

(A) Denmark

☐ 22001

(B) Sri Lanka

☐ 22002

(C) Vietnam

☐ 22003

(D) Serbia

☐ 22004

Right Answer :

Right Option Id : 22004

Serbia

SECTION 3**Question 41****Question Id : 42**

Find the missing number for below given series following the same logic.

16, 48, (?), 72, 36, 108, 54, 162, 81

Answer :

Option Id

(A) 28

☐ 42001

(B) 24

☐ 42002

(C) 34

☐ 42003

(D) 39

☐ 42004

Right Answer :

Right Option Id : 42002

24

Question 42**Question Id : 43**

In question, some statements are given, followed by three conclusions I, II and III. You have to consider the statements to be true, even if they seem to be at variance from commonly known facts. You have to decide which of the given conclusions, if any, follow from the given statements. Indicate your answer.

Statements: Only few papers are books. Some books are e-books. All e-books are magazines.

Conclusions:

I. No book is magazine.

II. Some magazines are paper.

III. No magazine is paper.

Answer :

Option Id

(A) Only I follows

☐ 43001

(B) Only II follows

☐ 43002

(C) Either II or III follows

☐ 43003

(D) Neither I nor II follows

☐ 43004

Right Answer :

Either II or III follows

Right Option Id : 43003

Question 43

Question Id : 44

Looking at a portrait of a man, Akshay said, "His mother is the wife of my father's son. Brothers and sisters I have none." At whose portrait was Akshay Looking ?

Answer :

Option Id

(A) His brother

☐ 44001

(B) His son

☐ 44002

(C) His nephew

☐ 44003

(D) His cousin

☐ 44004

Right Answer :

His son

Right Option Id : 44002

Question 44

Question Id : 45

The following equation is incorrect. Which two signs should be interchanged to correct the equation?

$$1 \div 14 \times 30 + 20 - 10 = 12$$

(I) - and +

(II) \div and \times

(III) \times and -

(IV) + and \div

Answer :

Option Id

(A) (III)

☐ 45001

(B) (II)

☐ 45002

(C) (IV)

☐ 45003

(D) (I)

☐ 45004

Right Answer :

(IV)

Right Option Id : 45003

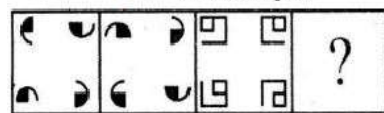
Question 45

Question Id : 46

Following question consists of two sets of figures. Figures A, B, C and D constitute the problem set while figures 1, 2, 3, 4 and 5 constitute the answer Set.

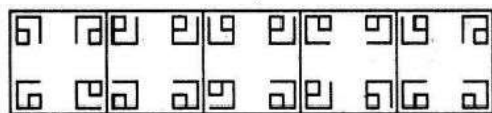
There is a definite relationship between figures A and B. Establish a similar relationship between figures C and D by selecting a suitable figure from the answer figures that would replace the question mark (?) in problem figures?

Problem Figures समस्या आकृति:



(A) (B) (C) (D)

Answer Figures उत्तर आकृति:



(1) (2) (3) (4) (5)

Answer :

Option Id

(A) (1)

☐ 46001

(B) (2)

☐ 46002

(C) (3)

☐ 46003

(D) (4)

Right Answer :

(3)

Right Option Id : 46003

Question 46

Complete the Analogy:

Float : Sink :: Boat : ?

Answer :

- (A) Ship
- (B) War
- (C) Missile
- (D) Submarine

Question Id : 47

Option Id

- ☐ 47001
- ☐ 47002
- ☐ 47003
- ☐ 47004

Right Answer :

Submarine

Right Option Id : 47004

Question 47

Which of the following is not right?

Answer :

- (A) ADH, BEI, CFJ, DGK
- (B) Z, V, R, N
- (C) F, P, Z, J
- (D) B, L, V, E

Question Id : 48

Option Id

- ☐ 48001
- ☐ 48002
- ☐ 48003
- ☐ 48004

Right Answer :

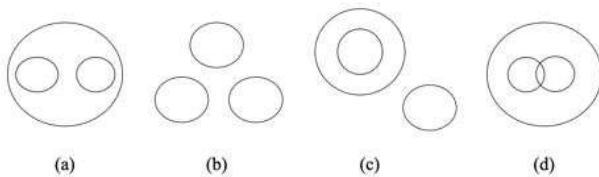
B, L, V, E

Right Option Id : 48004

Question 48

Choose the Venn diagram which best explains relationship among given items:

Bedroom, Window, Door



Answer :

- (A) (a)
- (B) (b)
- (C) (c)
- (D) (d)

Option Id

- ☐ 49001
- ☐ 49002
- ☐ 49003
- ☐ 49004

Right Answer :

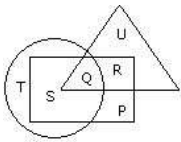
(a)

Right Option Id : 49001

Question 49

Study the following figure and answer the question given below.

Question Id : 41



- ☐ → Married people विवाहित लोगों
 → People who live in joint family जो संयुक्त परिवार में रहते हैं
 → School teachers स्कूल शिक्षक

By which letter, the married people who live in joint family but not are school teachers are represented ?

Answer :

(A) R

(B) U

(C) S

(D) P

Option Id

☐ 41001

☐ 41002

☐ 41003

☐ 41004

Question 50

Select the related number from the given alternatives.

343 : 1002 :: 512 : (?)

Answer :

(A) 1024

(B) 1509

(C) 1536

(D) 1016

Question Id : 50

Option Id

☐ 50001

☐ 50002

☐ 50003

☐ 50004

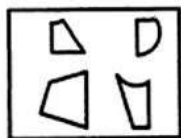
Right Answer :

1509

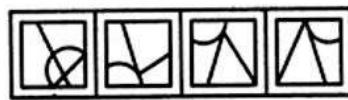
Right Option Id : 50002

Question 51

Find out which of the figures (1), (2), (3) and (4) can be formed from the pieces given in figure (X).



(X)



(1)

(2)

(3)

(4)

Answer :

(A) (1)

(B) (2)

(C) (3)

(D) (4)

Option Id

☐ 60001

☐ 60002

☐ 60003

☐ 60004

Right Answer :

(2)

Right Option Id : 60002

Question 52

Which word does NOT belong to the others?

Answer :

(A) ounce

(B) inch

(C) centimeter

Question Id : 52

Option Id

☐ 52001

☐ 52002

☐ 52003

(D) yard

☐ 52004

Right Answer :

ounce

Right Option Id : 52001

Question 53

Question Id : 53

The number of boys in the class is three times the number of girls. Which one of the following numbers cannot represent the total number of children in the class?

Answer :

Option Id

(A) 40

☐ 53001

(B) 42

☐ 53002

(C) 44

☐ 53003

(D) 48

☐ 53004

Right Answer :

42

Right Option Id : 53002

Question 54

Question Id : 54

The teachers of a school want to hold an essay competition. The topic of the essay has to be such that it resonates with the current affairs going around in the country. At the same time, they want to highlight the issues facing the environment. Which of the following topics is suitable for the test?

Answer :

Option Id

(A) Upcoming elections and their expected results

☐ 54001

(B) Drought and its prevention

☐ 54002

(C) New forest policy act

☐ 54003

(D) Panchayat elections and farmer issues

☐ 54004

Right Answer :

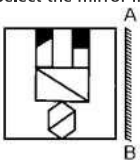
New forest policy act

Right Option Id : 54003

Question 55

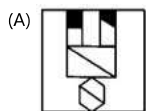
Question Id : 55

Select the mirror image of the given figure when the mirror is placed at the right side.

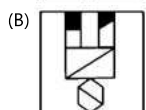


Answer :

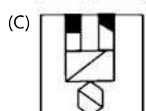
Option Id



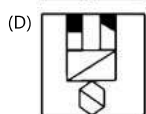
☐ 55001



☐ 55002



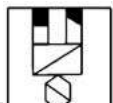
☐ 55003



☐ 55004

Right Answer :

Right Option Id : 55004

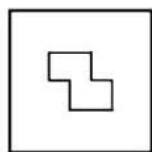


Question 56

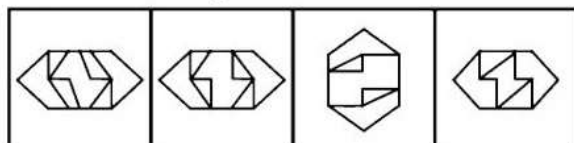
Question Id : 56

Select the answer figure in which the question figure is hidden

Question Figure: प्रश्न आकृति:



Answer Figure: उत्तर आकृति:



A

B

C

D

Answer :

(A) B

(B) A

(C) D

(D) C

Option Id

☐ 56001

☐ 56002

☐ 56003

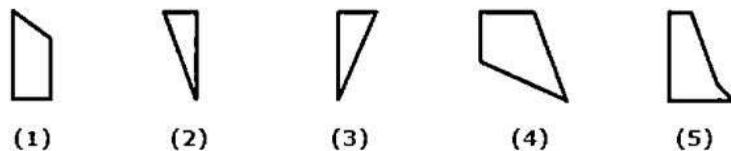
☐ 56004

Marks Given to All Candidates

Question 57

Question Id : 57

Select the alternative which represents three out of the five alternative figures which when fitted into each other would form a complete square.



(1)

(2)

(3)

(4)

(5)

Answer :

(A) (1),(2),(3)

(B) (2),(3),(4)

(C) (2),(4),(5)

(D) (1),(2),(5)

Option Id

☐ 57001

☐ 57002

☐ 57003

☐ 57004

Right Answer :

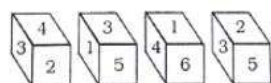
(2),(3),(4)

Right Option Id : 57002

Question 58

Question Id : 58

Four positions of a dice are given below. Identify what number will be on the bottom when there is a 5 on the top?



Answer :

(A) 6

(B) 3

Option Id

☐ 58001

☐ 58002

(C) 4

☐ 58003

(D) 2

☐ 58004

Right Answer :

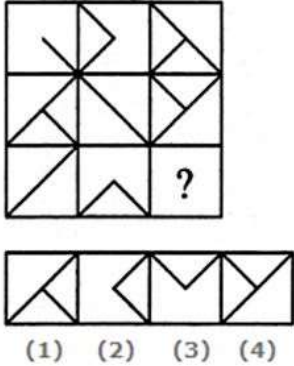
4

Right Option Id : 58003

Question 59

Question Id : 59

Select a suitable figure from the four alternatives that would complete the figure matrix.



Answer :

Option Id

(A) (1)

☐ 59001

(B) (2)

☐ 59002

(C) (3)

☐ 59003

(D) (4)

☐ 59004

Right Answer :

(2)

Right Option Id : 59002

Question 60

Question Id : 51

Find the number of triangles in the given figure.



Answer :

Option Id

(A) 5

☐ 51001

(B) 6

☐ 51002

(C) 8

☐ 51003

(D) 10

☐ 51004

Right Answer :

10

Right Option Id : 51004

SECTION 4

Question 61

Question Id : 77

Give the correct antonym for the word-Scanty

Answer :

Option Id

(A) Scarce

- (B) Insufficient
- (C) Abundance
- (D) non available

- ☐ 77001
- ☐ 77002
- ☐ 77003
- ☐ 77004

Right Answer :
Abundance

Right Option Id : 77003

Question 62

Give antonym of word-Group

Answer :

- (A) Individual
- (B) Herd
- (C) Cluster
- (D) Team

Question Id : 74

Option Id

- ☐ 74001
- ☐ 74002
- ☐ 74003
- ☐ 74004

Right Answer :
Individual

Right Option Id : 74001

Question 63

Give the correct synonym for word-SLUMP

Answer :

- (A) Recession
- (B) Rise
- (C) Increase
- (D) Growth

Question Id : 75

Option Id

- ☐ 75001
- ☐ 75002
- ☐ 75003
- ☐ 75004

Right Answer :
Recession

Right Option Id : 75001

Question 64

Give the synonym for the word-Convoy

Answer :

- (A) Abandon
- (B) Accompany
- (C) Ditch
- (D) Dump

Question Id : 76

Option Id

- ☐ 76001
- ☐ 76002
- ☐ 76003
- ☐ 76004

Right Answer :
Accompany

Right Option Id : 76002

Question 65

Transform the following sentence into Passive Voice.:
Who can question Gandhi's integrity?

Answer :

- (A) By whom Gandhi's integrity can be questioned?
- (B) By whom can Gandhi's integrity be questioned?
- (C) Gandhi's integrity can be questioned by who?

Question Id : 73

Option Id

- ☐ 73001
- ☐ 73002

☐ 73003

(D) Who could have questioned Gandhi's integrity?

☐ 73004

Right Answer :

By whom can Gandhi's integrity be questioned?

Right Option Id : 73002

Question 66

Give one word substitute for the following:

"a medicine that prevents decomposing"

Answer :

(A) antiseptic

(B) catalogue

(C) credulous

(D) parasite

Question Id : 78

Option Id

☐ 78001

☐ 78002

☐ 78003

☐ 78004

Right Answer :

antiseptic

Right Option Id : 78001

Question 67

Give one word for the following group of words or phrases:

"A woman whose husband is dead"

Answer :

(A) widow

(B) martyr

(C) spinster

(D) bachelor

Question Id : 79

Option Id

☐ 79001

☐ 79002

☐ 79003

☐ 79004

Right Answer :

widow

Right Option Id : 79001

Question 68

Fill in the blanks with suitable option.: He was _____ from all charges levelled against him.

Answer :

(A) apprehended

(B) judged

(C) enigmatic

(D) exonerated

Question Id : 80

Option Id

☐ 80001

☐ 80002

☐ 80003

☐ 80004

Right Answer :

exonerated

Right Option Id : 80004

Question 69

Choose the word with correct spelling.

Answer :

(A) nacklace

(B) suggetion

(C) vegetarian

(D) jewellery

Question Id : 71

Option Id

☐ 71001

☐ 71002

☐ 71003

☐ 71004

Right Answer :
vegetarian

Right Option Id : 71003

Question 70

Choose the correct article: "Mount Everest is ____ highest mountain."

Answer :

- (A) a
- (B) an
- (C) the
- (D) No article

Question Id : 72

Option Id

- ☐ 72001
- ☐ 72002
- ☐ 72003
- ☐ 72004

Right Answer :
the

Right Option Id : 72003

Question 71

Choose the correct meaning of the idiom: "hit the nail on the head"

Answer :

- (A) To die/to pass away
- (B) To go to bed
- (C) Saying or doing exactly right about something
- (D) Achieve two things at once

Question Id : 69

Option Id

- ☐ 69001
- ☐ 69002
- ☐ 69003
- ☐ 69004

Right Answer :
Saying or doing exactly right about something

Right Option Id : 69003

Question 72

Select the option to make the sentence correct: "The woman works here is Japan woman."

Answer :

- (A) The woman who works here is Japan.
- (B) The woman who works here is from Japan.
- (C) The woman works Japan.
- (D) The woman works is Japan.

Question Id : 70

Option Id

- ☐ 70001
- ☐ 70002
- ☐ 70003
- ☐ 70004

Right Answer :
The woman who works here is from Japan.

Right Option Id : 70002

Question 73

Choose the correct article: "Ramesh is writing ____ letter."

Answer :

- (A) a
- (B) an
- (C) the
- (D) No article

Question Id : 62

Option Id

- ☐ 62001
- ☐ 62002
- ☐ 62003
- ☐ 62004

Right Answer :
a

Right Option Id : 62001

Question 74

Fill in the blank with the correct preposition.: I took a plane ___ Munich to Rome.

Answer :

(A) from

(B) by

(C) within

(D) on

Right Answer :

from

Question Id : 63

Option Id

☐ 63001

☐ 63002

☐ 63003

☐ 63004

Right Option Id : 63001

Question 75

Which part of the sentence is incorrect?: "It is always better to wake up early in the morning."

Answer :

(A) It is always better

(B) to wake up early

(C) in the morning

(D) No error

Right Answer :

No error

Question Id : 65

Option Id

☐ 65001

☐ 65002

☐ 65003

☐ 65004

Right Option Id : 65004

Question 76

Choose the correct conjunction: "The book was wet ____ the book was left out during the rain.

Answer :

(A) because

(B) like

(C) ever

(D) after

Right Answer :

because

Question Id : 64

Option Id

☐ 64001

☐ 64002

☐ 64003

☐ 64004

Right Option Id : 64001

Question 77

Choose the correct preposition: "He is married ___ Sushila."

Answer :

(A) to

(B) between

(C) amongst

(D) in

Right Answer :

to

Question Id : 61

Option Id

☐ 61001

☐ 61002

☐ 61003

☐ 61004

Right Option Id : 61001

Question 78

Choose the correct conjunction: "He cleared the exam_____ he was sick."

Answer :

(A) but

Question Id : 66

Option Id

(B) even though

(C) because

(D) otherwise

☐ 66001

☐ 66002

☐ 66003

☐ 66004

Right Answer :

even though

Right Option Id : 66002

Question 79

Fill in the blanks with suitable option.: Indians need sincere leaders, not people of ____ integrity.

Answer :

(A) doubting

(B) doubtful

(C) doubtless

(D) double

Question Id : 67

Option Id

☐ 67001

☐ 67002

☐ 67003

☐ 67004

Right Answer :

doubtful

Right Option Id : 67002

Question 80

Choose the correctly spelt word.

Answer :

(A) unnecessary

(B) trafic

(C) ofen

(D) inradible

Question Id : 68

Option Id

☐ 68001

☐ 68002

☐ 68003

☐ 68004

Right Answer :

unnecessary

Right Option Id : 68001

SECTION 5

Question 81

From a pack of cards, two are drawn one by one without replacement. Find the probabilities that both of them are kings.

Answer :

(A) 11/21

(B) 13/121

(C) 1/221

(D) 1/121

Question Id : 99

Option Id

☐ 99001

☐ 99002

☐ 99003

☐ 99004

Right Answer :

1/221

Right Option Id : 99003

Question 82

The HCF of two numbers is 13 and their LCM is 1001. If one number is 91 then find the other number.

Answer :

(A) 161

(B) 149

Question Id : 98

Option Id

☐ 98001

☐ 98002

(C) 143

☐ 98003

(D) 152

☐ 98004

Right Answer :
143

Right Option Id : 98003

Question 83

Find the surface area (in cm^2) of a sphere having radius 9 cm.

Answer :

(A) 324π

(B) 162π

(C) 81π

(D) 212π

Question Id : 97

Option Id

☐ 97001

☐ 97002

☐ 97003

☐ 97004

Right Answer :
 324π

Right Option Id : 97001

Question 84

A man covers half of his journey at 10 km/hr and the remaining half at 13 km/hr. His average speed (in km/hr) is :-

Answer :

(A) 260/23

(B) 260/21

(C) 258/21

(D) 259/23

Question Id : 96

Option Id

☐ 96001

☐ 96002

☐ 96003

☐ 96004

Right Answer :
260/23

Right Option Id : 96001

Question 85

Rohan does a piece of work twice as fast as mohan and together they finish a piece of work in 12 days. In how many days will Rohan alone finish the work?

Answer :

(A) 17

(B) 22

(C) 18

(D) 20

Question Id : 95

Option Id

☐ 95001

☐ 95002

☐ 95003

☐ 95004

Right Answer :
18

Right Option Id : 95003

Question 86

If one root of a quadratic equation $x^2 + x + 4k = 0$ is '2', then value of k is

Answer :

(A) $3/2$

(B) -3

(C) $-3/2$

(D) 3

Question Id : 94

Option Id

☐ 94001

☐ 94002

☐ 94003

☐ 94004

Right Answer :

-3/2

Right Option Id : 94003

Question 87

Ram is 5 times older than Shyam. Ram is also 20 years older than Shyam. Then present ages of Ram and Shyam respectively are:

Answer :

(A) 25 years, 5 years

(B) 36 years, 6 years

(C) 50 years, 5 years

(D) 20 years, 4 years

Question Id : 93

Option Id

☐ 93001

☐ 93002

☐ 93003

☐ 93004

Right Answer :

25 years, 5 years

Right Option Id : 93001

Question 88

Find the compound interest on Rs. 4000 at 3% per annum for 2 years compounded annually.

Answer :

(A) Rs. 243.6

(B) Rs. 257.8

(C) Rs. 240.5

(D) Rs. 247.9

Question Id : 92

Option Id

☐ 92001

☐ 92002

☐ 92003

☐ 92004

Right Answer :

Rs. 243.6

Right Option Id : 92001

Question 89

A train crosses a man coming from the opposite direction in 7.5 seconds. If the speed of man be 10 m/s and speed of train is 20 m/s, find the length of train?

Answer :

(A) 225 m

(B) 125 m

(C) 150 m

(D) 180 m

Question Id : 91

Option Id

☐ 91001

☐ 91002

☐ 91003

☐ 91004

Right Answer :

225 m

Right Option Id : 91001

Question 90

If average marks of three batches of 55, 60 and 45 students respectively is 50, 55, 60, then the average marks of all the students is:

Answer :

(A) 53.33

(B) 54.68

(C) 55

(D) None of these

Question Id : 81

Option Id

☐ 81001

☐ 81002

☐ 81003

☐ 81004

Right Answer :

54.68

Right Option Id : 81002

Question 91

A man buys a cycle for Rs. 1400 and sells it at a loss of 15%. What is the selling price of the cycle?

Answer :

- (A) Rs. 1090
(B) Rs. 1160
(C) Rs. 1190
(D) Rs. 1202

Right Answer :

Rs. 1190

Question Id : 89

Option Id

- ☐ 89001
☐ 89002
☐ 89003
☐ 89004

Right Option Id : 89003

Question 92

A computer and a printer are sold at Rs. 38,635. The computer was purchased at Rs. 34550 and cost price of the printer was Rs. 2625. Find Profit or Loss in the whole transaction.

Answer :

- (A) loss Rs.1420
(B) profit Rs. 1420
(C) profit Rs. 1460
(D) loss Rs. 1460

Right Answer :

profit Rs. 1460

Question Id : 88

Option Id

- ☐ 88001
☐ 88002
☐ 88003
☐ 88004

Right Option Id : 88003

Question 93

Pipe A can fill a tank in 5 hours, pipe B in 10 hours and pipe C in 30 hours. If all the pipes are open, in how many hours will the tank be filled?

Answer :

- (A) 2
(B) 2.5
(C) 3
(D) 3.5

Right Answer :

3

Question Id : 87

Option Id

- ☐ 87001
☐ 87002
☐ 87003
☐ 87004

Right Option Id : 87003

Question 94

In how many different ways can 6 different balls be distributed to 4 different boxes, when each box can hold any number of ball?

Answer :

- (A) 2048
(B) 1296
(C) 4096
(D) None of these

Right Answer :

4096

Question Id : 86

Option Id

- ☐ 86001
☐ 86002
☐ 86003
☐ 86004

Right Option Id : 86003

Question 95

A shopkeeper bought 40 pens for Rs.18 each and he sold all of them at Rs. 19 each. Find his Profit or Loss in the whole transaction.

Answer :

Question Id : 85

Option Id

- (A) Loss Rs.40
- (B) Profit Rs. 40
- (C) Profit Rs. 400
- (D) Loss Rs. 360

- ☐ 85001
- ☐ 85002
- ☐ 85003
- ☐ 85004

Right Answer :
Profit Rs. 40

Right Option Id : 85002

Question 96

Find the rate of interest per annum if simple interest on Rs. 500 for 3 years is Rs. 150

Answer :

- (A) 10 Percent
- (B) 5 Percent
- (C) 20 Percent
- (D) 2.5 Percent

Question Id : 84

Option Id

- ☐ 84001
- ☐ 84002
- ☐ 84003
- ☐ 84004

Right Answer :
10 Percent

Right Option Id : 84001

Question 97

14 Percent of 400 is,

Answer :

- (A) 56
- (B) 560
- (C) 5.6
- (D) 5.8

Question Id : 83

Option Id

- ☐ 83001
- ☐ 83002
- ☐ 83003
- ☐ 83004

Right Answer :
56

Right Option Id : 83001

Question 98

Find the average of 37, 9, 10, 70, 40 & 74.

Answer :

- (A) 40
- (B) 45
- (C) 50
- (D) 54

Question Id : 82

Option Id

- ☐ 82001
- ☐ 82002
- ☐ 82003
- ☐ 82004

Right Answer :
40

Right Option Id : 82001

Question 99

The value of $[(10)^{150} \div (10)^{146}]$

Answer :

- (A) 1000
- (B) 10000
- (C) 100000

Question Id : 90

Option Id

- ☐ 90001
- ☐ 90002
- ☐ 90003

(D) 106

☐ 90004

Right Answer :
10000

Right Option Id : 90002

Question 100

Question Id : 100

A triangle having sides equal to 7 cm, 24 cm and 25 cm forms a cone when revolved about 24 cm side. What is the volume of a cone formed?

Answer :

Option Id

(A) 1225 cm^3

☐ 100001

(B) 1232 cm^3

☐ 100002

(C) 4000 cm^3

☐ 100003

(D) 3696 cm^3

☐ 100004

Right Answer :
 1232 cm^3

Right Option Id : 100002